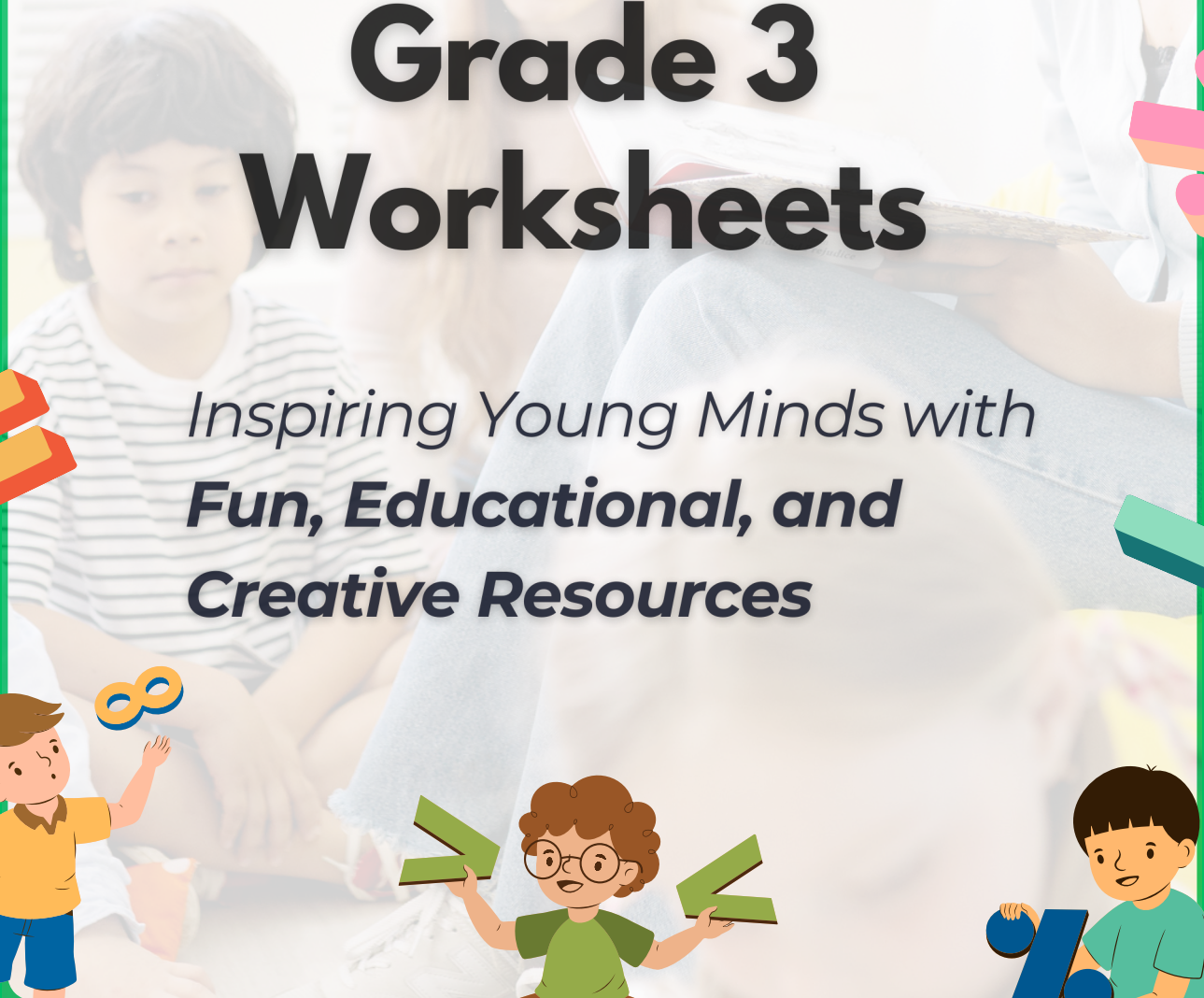




50

Grade 3 Worksheets

*Inspiring Young Minds with
Fun, Educational, and
Creative Resources*



Name: _____

Jason and Megan have the same amount of money. Jason has 7 nickels and 6 dimes. If Megan has 4 dimes, then how many nickels does she have?

A year on Mars lasts 687 days. Robot Pete lives on Mars. He is exactly 4 Mars years old. That means he was born 2,748 days ago, assuming a robot was born, which makes no sense. But who cares!

Robot Pete's older brother Jack was born 379 days before Pete. How many days old is Jack? Don't forget, to be older, Pete should be MORE days old than Jack! If your answer is less than 2,748 then think again.

Name: _____

Write the missing number.

Draw a line to match each problem with the same answer.

13, 10, _____, 4

_____, 38, 26, 14

_____, 39, 28, 17

11, 9, _____, 5

57, _____, 35, 24

10, 7, 4, _____

21, 19, 17, _____

43, _____, 21, 10

34, 23, 12, _____

60, 45, 30, _____

38, _____, 26, 20

_____, 36, 26, 16

$5 + 1 + 2$

17, 34, 51, 68, 85, 102,

_____, 136

Round 65 to the nearest 10.

2 tens, 6 thousands

How many hours are there
from 6 a.m. to 9 p.m.?

Make your own
equation.

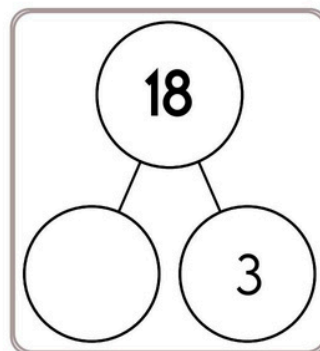
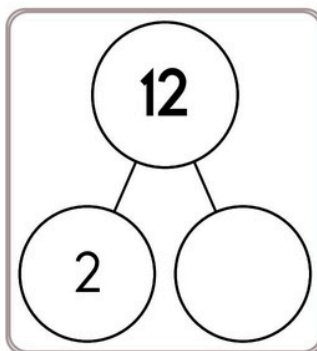
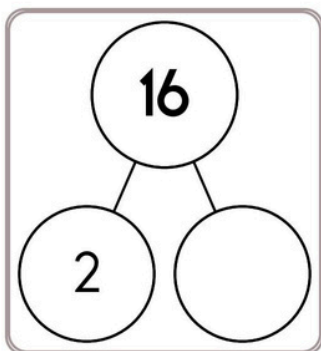
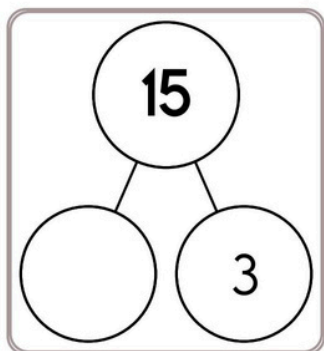
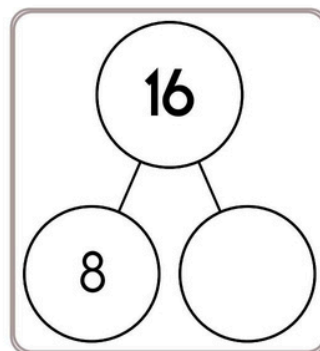
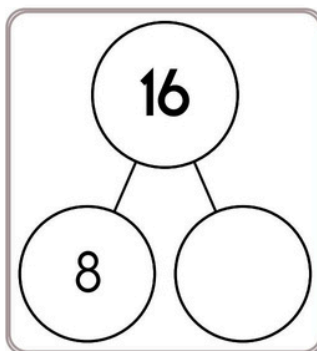
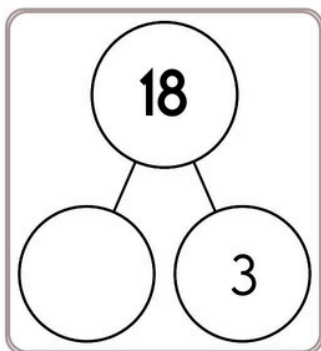
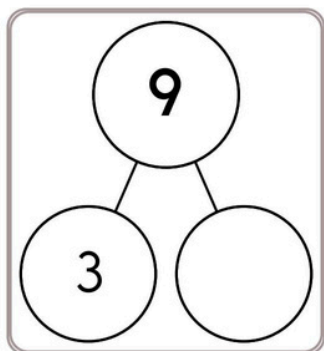
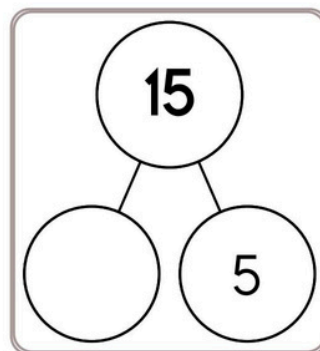
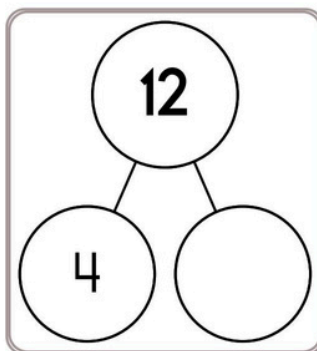
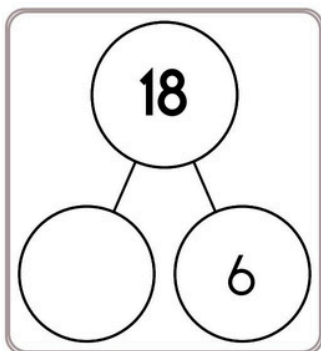
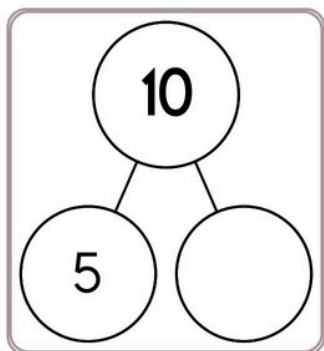
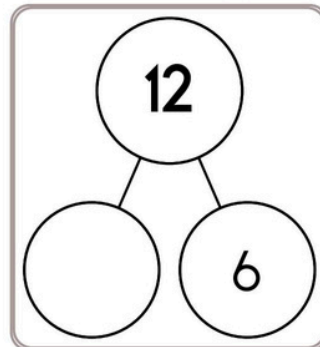
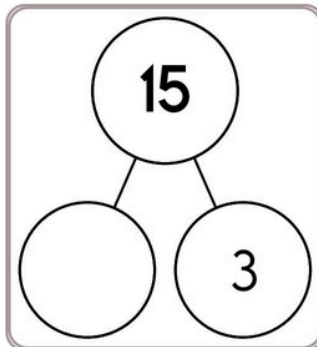
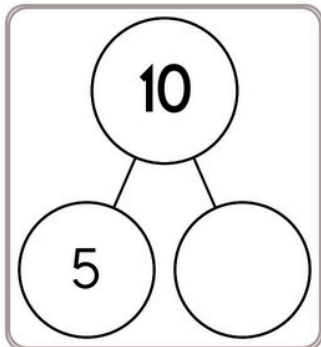
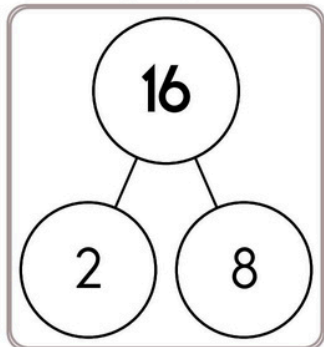
$___ - 6 = ___$



Name: _____

Get a fidget spinner! Spin it.

I needed to spin _____ time(s) to finish.

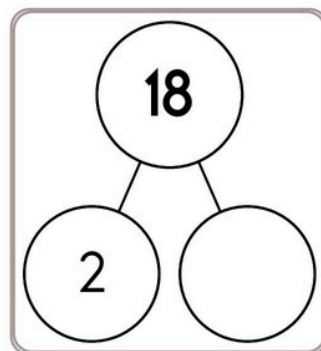
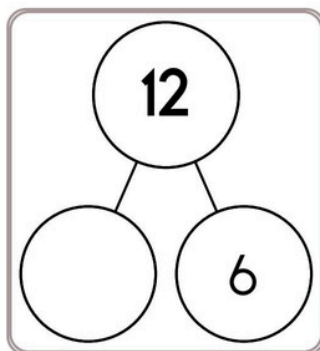
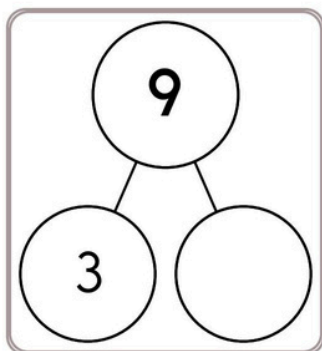
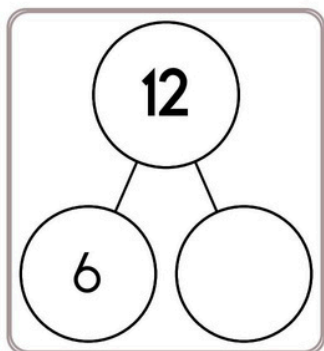
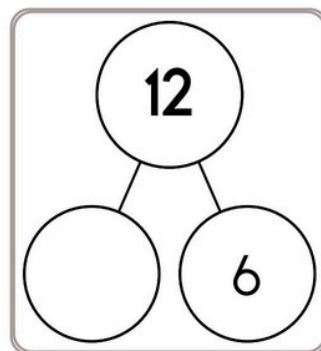
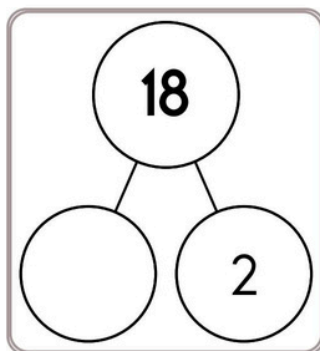
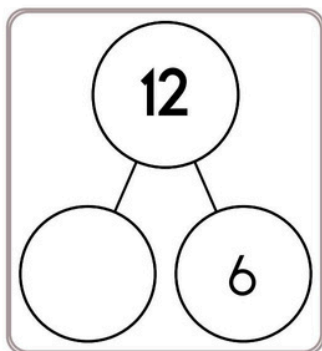
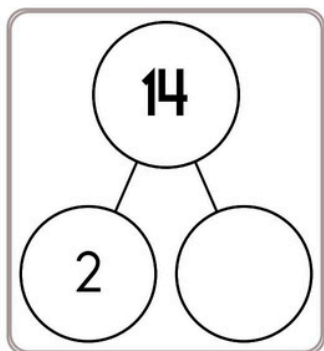
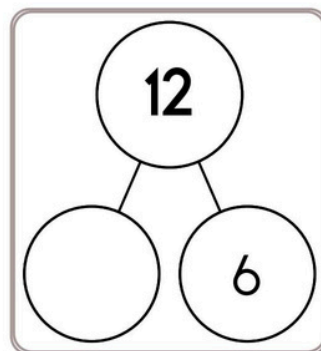
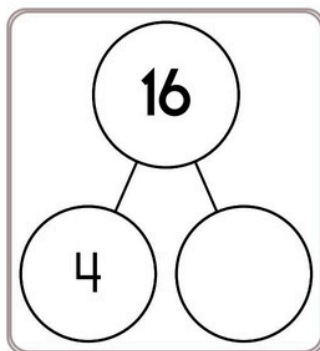
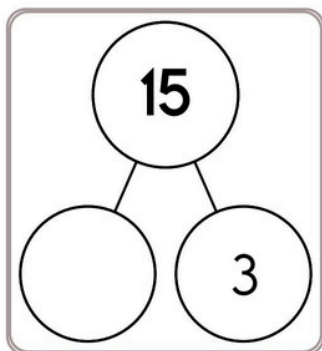
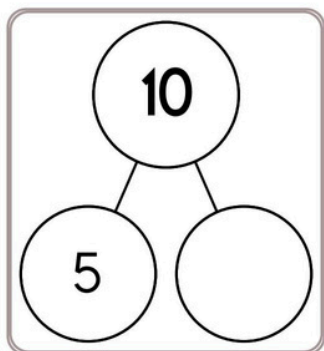
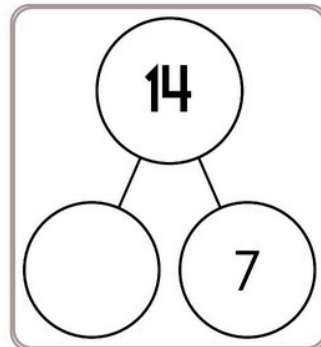
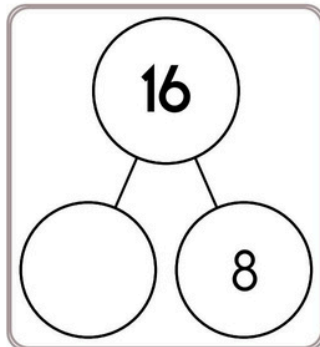
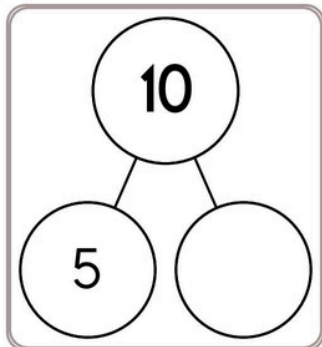
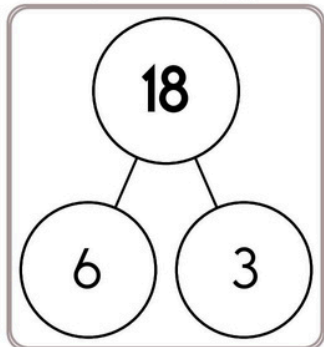




Name: _____

Spin again. Multiply. Complete each number bond.

I needed to spin _____ time(s) to finish.



Name: _____

A magician is coming to Mountain Springs Elementary School. He will do magic tricks for the first and second grade students. There are 76 girls in the first grade and 53 girls in the second grade. There are 50 boys in the first grade and 43 boys in the second grade. How many first and second grade students are there in all?

Megan, Wendy, and Rosa made a book about Blame Someone Else day. The book was sixteen pages long and had twelve pictures. Megan drew all the pictures. Wendy wrote half of the pages. Rosa wrote half of the pages. How many pages did Wendy write?

Show what 9×2 looks like by drawing an array. What is the answer?

Jason is bored, so he decides to start coloring the outside sidewalk. Would you believe every 15 minutes he goes through 10 pieces of chalk. That's a lot of chalk! After 2 hours his arms are so tired he quits. How much chalk did Jason use?

Name: _____

Write the missing number.

Draw a line to match each problem with the same answer.

4, _____, 14, 19

1, 8, 15, _____

22, 36, 50, _____

5, _____, 13, 17

8, 19, _____, 41

23, 32, _____, 50

20, 27, 34, _____

18, _____, 42, 54

8, _____, 18, 23

19, 34, 49, _____

13, 16, 19, _____

2, _____, 24, 35

I, K, M, O, _____, S, U,
W, Y

Make your own
equation.

$$\underline{\quad} + 6 = \underline{\quad}$$

Circle the number that is
smallest.

30,300 30,030

33,000 30,003

double 70

39, 59, 79, 99, 119, 139,

_____, 179, 199, 219

7 tens, 8 hundreds, 4 ones,
5 thousands

Name: _____

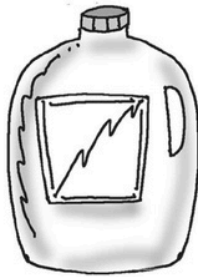


Measurement

Liter Volume Estimation



You need to know...



A gallon is more than a liter.



A liter is less than a gallon but more than a cup.

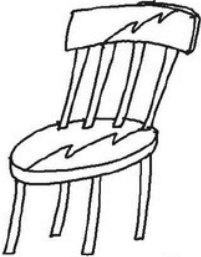
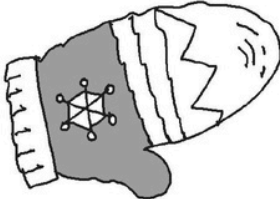






A cup is less than a liter.



Underline one of the three words to estimate the object's volume compared to a liter.



 More Equal Less	 More Equal Less	 More Equal Less
 More Equal Less	 More Equal Less	 More Equal Less



Name: _____

Spin again.

I needed to spin _____ time(s) to finish.

How many?



$$\begin{array}{r} 38 \\ + \quad 1 \\ \hline \end{array}$$

40, 45, 50, 55, 60, _____.

70, 75

Draw 4 small squares.

Then color in some to

show $\frac{1}{2}$.

Write the numbers.

forty ____

forty-two ____

seventy ____

seventy-six ____

6, J, w, w, D, D, 6, J, w,

w, D, _____, 6, J, w

$$5 + 3 + 5 - 5 - 2$$

Write an even number.

In five hours it will be midnight. What time is it now?

Find a clock. What time is it right now?

5 thousands, 6 ones, 7 tens

Circle the number that is largest.

5,800 5,008

5,080




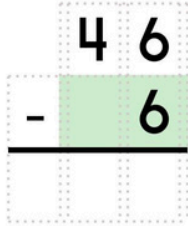
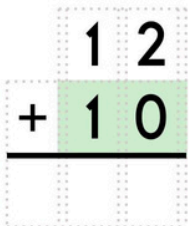
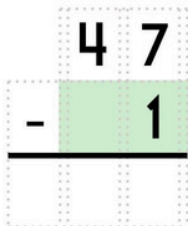
Name: _____


Get a fidget spinner! Spin it.

I needed to spin _____ time(s) to finish.

96, _____, _____, _____
 _____, _____, 102

How much is this?


How much is this?


Write these numbers in order from smallest to largest.
 60, 17, 15, 80, 101
 _____, _____, _____, _____, _____

2 tens + 3 ones = ____
 1 ten + 7 ones = ____
 3 tens + 1 one = ____
 4 tens + 0 ones = ____

What comes before and after?
 _____, 89, _____
 _____, 108, _____
 _____, 125, _____

Wendy has nine tickets to the middle school play. She gave April a ticket. She gave two tickets to Amy. How many tickets does Wendy have left?

5 less than 475

If you know $86 + 13 = 99$
 Then what is $86 + 11$?

Name: _____

Only use a pencil to write the numbers on the blank lines. You do not need any scrap paper! Solve it in your head. If you forget a number, then start over. Cool, huh?



imagine 6 in your head
add 2
double it

Write the tens digit.

A

imagine 8 in your head
double it
add 5

Add the tens digit to the ones digit.
Write the sum.

B

imagine 9 in your head
double it
subtract 4

Write the even digit in your answer.

C

imagine 7 in your head
subtract 3
add 9
subtract 2

Write the ones digit.

C

What is the sum?

$$A + B + C$$

Wow! Great job! That's the answer, but do you know how to SPELL the number?

_____e

6 after 15 _____	4 before 19 _____	7 before 15 _____
2 after 18 _____	2 before 13 _____	8 before 18 _____
8 after 17 _____	3 before 14 _____	9 before 17 _____
9 after 13 _____	5 before 12 _____	6 before 11 _____
5 after 19 _____	1 before 16 _____	6 before 16 _____

Name: _____

Peter cut out 21 paper snowflakes. He put 16 on his window. How many did he have left?

Jack hit the ball 14 times. Max hit the ball 10 times. How many times did they hit the ball in all?

Robert saw 12 turkeys. Hunter saw 20 turkeys. How many turkeys did they see in all?

Change one letter in each word to make a new word.

Change one letter in each word. Write the new word. Cross off the new letter in the box.

r • o • a • e • c • a • o • e • o

must ↓ m _ st	print ↓ _____	meat ↓ _____
low ↓ _____	new ↓ _____	small ↓ _____
being ↓ _____	think ↓ _____	fix ↓ _____

Name: _____

The students in Mr. Rodriguez's class are building rafts. They will ride their rafts on the river. The river raft race is one of the Freedom Week events. There are 28 students in the class. Two students can ride on each raft. How many rafts will they need?

Justin did not believe in bad luck. He broke 13 mirrors. He walked under 13 ladders. He stepped on 13 cracks in the sidewalk. He let 13 black cats walk in front of him. On his way home from school he found 13 dimes. How many more dimes does he need to have \$2.70 worth of dimes?

Mrs. Smith wrote the numbers 3 and 12 on the board. She always had a weird way to teach math. "Now, class," said Mrs. Smith. "My printer is broken. Please write your own math problem using these numbers."

April is 62 inches tall. Wendy is exactly 5 feet tall. Who is taller? By how much?



Name: _____

Spin again.

I needed to spin _____ time(s) to finish.

$9 + 6 = \underline{\quad}$

$4 + 9 = \underline{\quad}$

$3 + 4 = \underline{\quad}$

$8 + 7 = \underline{\quad}$

$5 + 8 = \underline{\quad}$

$8 + 5 = \underline{\quad}$

$6 + 9 = \underline{\quad}$

$3 + 7 = \underline{\quad}$

$9 + 3 = \underline{\quad}$

$4 + 6 = \underline{\quad}$

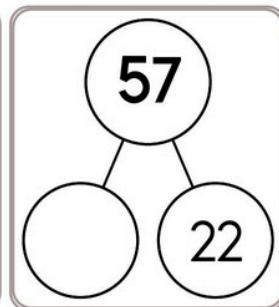
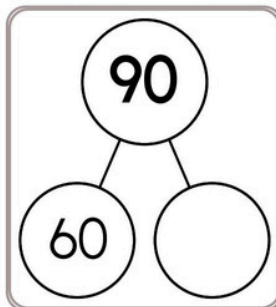
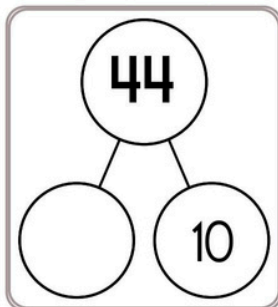
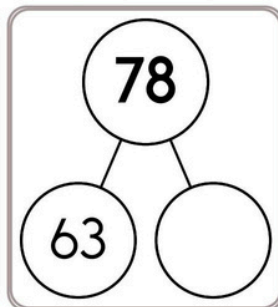
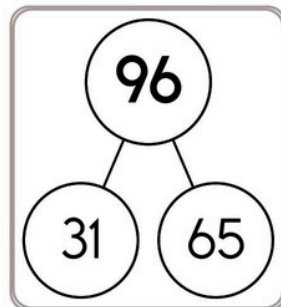
$5 + 8 = \underline{\quad}$

$8 + 8 = \underline{\quad}$

$3 + 8 = \underline{\quad}$

$4 + 4 = \underline{\quad}$

$6 + 8 = \underline{\quad}$



$48 + 4 = \underline{\quad}$

$33 + 3 = \underline{\quad}$

$55 + 3 = \underline{\quad}$

$23 + 9 = \underline{\quad}$

$68 + 5 = \underline{\quad}$

$13 + 5 = \underline{\quad}$

$76 + 5 = \underline{\quad}$

$59 + 9 = \underline{\quad}$

$29 + 5 = \underline{\quad}$

$77 + 4 = \underline{\quad}$

$15 + 8 = \underline{\quad}$

$63 + 6 = \underline{\quad}$

$44 + 6 = \underline{\quad}$

$38 + 5 = \underline{\quad}$

$67 + 5 = \underline{\quad}$

$15 + 7 = \underline{\quad}$

$37 + 6 = \underline{\quad}$

$48 + 7 = \underline{\quad}$

$28 + 6 = \underline{\quad}$

$77 + 7 = \underline{\quad}$

$58 + 9 = \underline{\quad}$

$79 + 8 = \underline{\quad}$

$35 + 9 = \underline{\quad}$

$43 + 8 = \underline{\quad}$

$24 + 5 = \underline{\quad}$

$66 + 7 = \underline{\quad}$

$55 + 8 = \underline{\quad}$

$19 + 6 = \underline{\quad}$

$57 + 5 = \underline{\quad}$

$76 + 4 = \underline{\quad}$

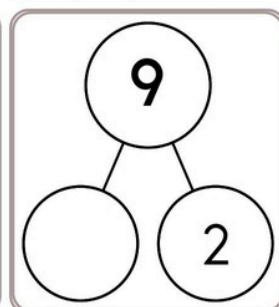
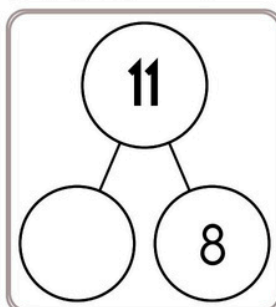
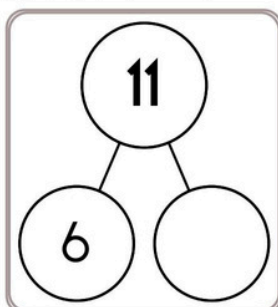
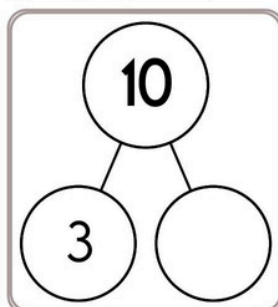
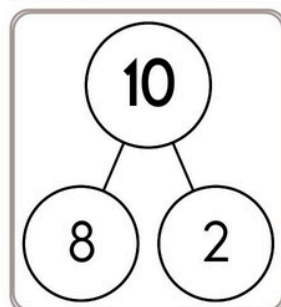
$15 + 5 = \underline{\quad}$

$26 + 6 = \underline{\quad}$

$68 + 9 = \underline{\quad}$

$44 + 8 = \underline{\quad}$

$36 + 7 = \underline{\quad}$



$37 + 5 = \underline{\quad}$

$14 + 8 = \underline{\quad}$

$45 + 7 = \underline{\quad}$

$63 + 9 = \underline{\quad}$

$79 + 8 = \underline{\quad}$

$25 + 3 = \underline{\quad}$

$53 + 4 = \underline{\quad}$

$23 + 7 = \underline{\quad}$

$59 + 7 = \underline{\quad}$

$16 + 9 = \underline{\quad}$

$43 + 5 = \underline{\quad}$

$34 + 3 = \underline{\quad}$

$75 + 8 = \underline{\quad}$

$67 + 5 = \underline{\quad}$

$13 + 4 = \underline{\quad}$

$54 + 7 = \underline{\quad}$

$24 + 9 = \underline{\quad}$

$74 + 3 = \underline{\quad}$

$68 + 7 = \underline{\quad}$

$48 + 9 = \underline{\quad}$



Name: _____

Get a fidget spinner! Spin it.

I needed to spin _____ time(s) to finish.

$7 + 3 = \underline{\quad}$

$8 + 7 = \underline{\quad}$

$6 + 6 = \underline{\quad}$

$6 + 4 = \underline{\quad}$

$7 + 7 = \underline{\quad}$

$3 + 4 = \underline{\quad}$

$4 + 3 = \underline{\quad}$

$7 + 8 = \underline{\quad}$

$9 + 9 = \underline{\quad}$

$4 + 5 = \underline{\quad}$

$4 + 6 = \underline{\quad}$

$5 + 8 = \underline{\quad}$

$5 + 9 = \underline{\quad}$

$8 + 4 = \underline{\quad}$

$9 + 5 = \underline{\quad}$

$9 + 6 = \underline{\quad}$

$5 + 7 = \underline{\quad}$

$7 + 6 = \underline{\quad}$

$9 + 3 = \underline{\quad}$

$4 + 6 = \underline{\quad}$

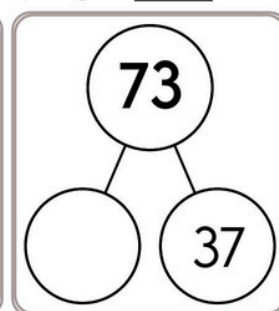
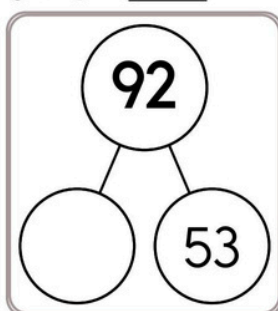
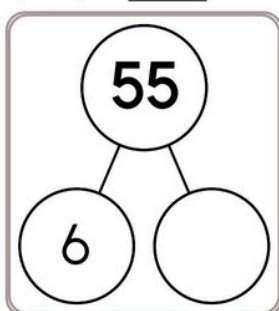
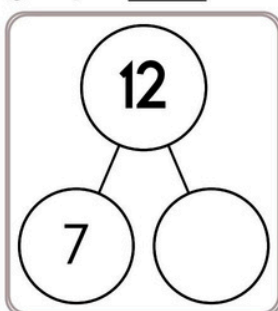
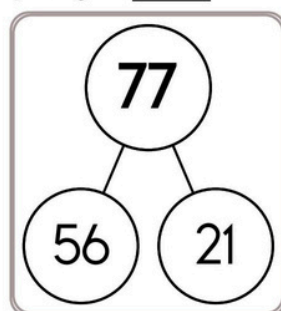
$7 + 5 = \underline{\quad}$

$3 + 9 = \underline{\quad}$

$4 + 4 = \underline{\quad}$

$5 + 4 = \underline{\quad}$

$4 + 5 = \underline{\quad}$



$45 + 8 = \underline{\quad}$

$38 + 7 = \underline{\quad}$

$24 + 8 = \underline{\quad}$

$13 + 6 = \underline{\quad}$

$57 + 6 = \underline{\quad}$

$77 + 5 = \underline{\quad}$

$69 + 3 = \underline{\quad}$

$58 + 4 = \underline{\quad}$

$74 + 3 = \underline{\quad}$

$36 + 9 = \underline{\quad}$

$29 + 8 = \underline{\quad}$

$64 + 8 = \underline{\quad}$

$48 + 5 = \underline{\quad}$

$14 + 5 = \underline{\quad}$

$15 + 9 = \underline{\quad}$

$63 + 4 = \underline{\quad}$

$29 + 5 = \underline{\quad}$

$75 + 5 = \underline{\quad}$

$57 + 8 = \underline{\quad}$

$44 + 8 = \underline{\quad}$

$33 + 8 = \underline{\quad}$

$19 + 10 = \underline{\quad}$

$58 + 9 = \underline{\quad}$

$28 + 8 = \underline{\quad}$

$65 + 3 = \underline{\quad}$

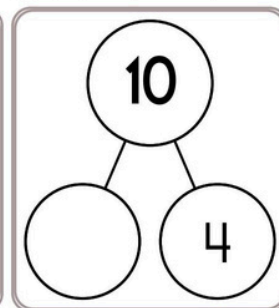
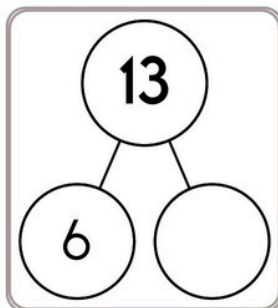
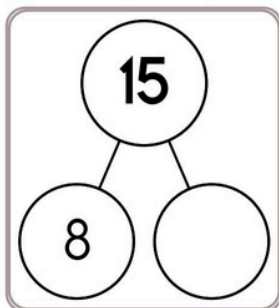
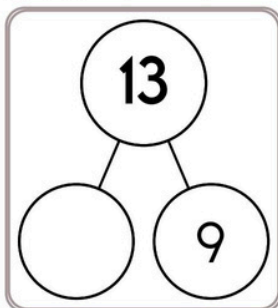
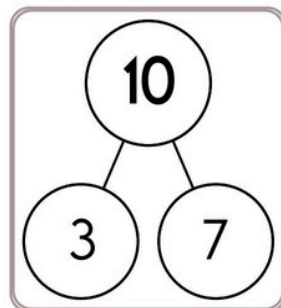
$36 + 7 = \underline{\quad}$

$45 + 6 = \underline{\quad}$

$75 + 4 = \underline{\quad}$

$69 + 4 = \underline{\quad}$

$37 + 4 = \underline{\quad}$



$47 + 6 = \underline{\quad}$

$53 + 7 = \underline{\quad}$

$67 + 5 = \underline{\quad}$

$25 + 6 = \underline{\quad}$

$34 + 7 = \underline{\quad}$

$75 + 7 = \underline{\quad}$

$16 + 4 = \underline{\quad}$

$38 + 4 = \underline{\quad}$

$57 + 5 = \underline{\quad}$

$49 + 6 = \underline{\quad}$

$66 + 7 = \underline{\quad}$

$15 + 7 = \underline{\quad}$

$74 + 8 = \underline{\quad}$

$29 + 7 = \underline{\quad}$

$55 + 9 = \underline{\quad}$

Name: _____

Mental Math

— #1 —

⌘ Start with the number 418.

418



⌘ Subtract 6.

4 1 2 5 1 5 9 2 7 6 (Circle your answer to double check you are correct.) _____

⌘ Add half of 18.

6 9 4 2 1 3 2 6 1 2 _____

⌘ Subtract 4.

2 8 8 5 6 4 1 7 4 9 _____

⌘ Add the digits in your number. The sum of that is your new number.

9 7 8 8 1 2 2 7 3 2 _____

Mental Math

— #2 —


 Start with the sum of 7 and 8.

9 2 5 6 1 5 1 5 8 3 (Circle your answer to double check you are correct.) _____



 Increase that number by 5.

8 6 6 2 0 1 4 7 3 0 _____

 Add the digits in your number. The sum of that is your new number.

3 2 4 8 9 8 5 0 2 6 _____

 Triple that number.

5 6 7 2 6 0 9 6 4 7 _____

 Add 6 hundreds.

1 6 6 0 6 3 8 1 2 5 _____

Name: _____

Draw a line from START to END.

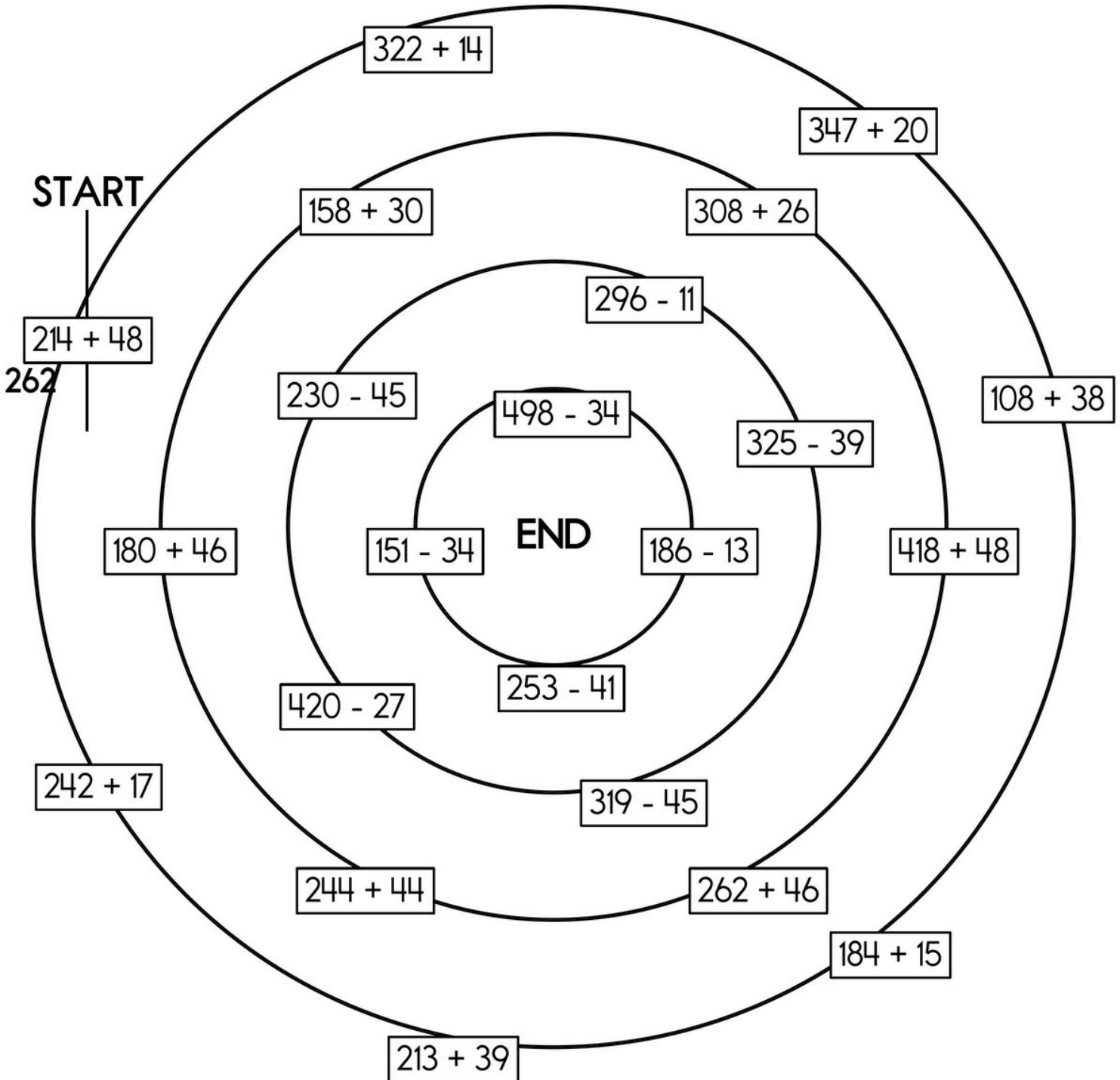
212

~~262~~

393

466

Cross out the number you use above and then write it below.



Name: _____

It is 7:42 when Maria leaves her house. She arrives at school at 8:09. How much time has passed?

Circle the number that is largest.

20,040 20,400

20,004 24,000

6 less than 746

April has a bowl. She puts 15 pennies into the bowl. David sees the bowl and takes 7 pennies. How much money (in cents) is left in the bowl?

Amy is four years younger than her older sister, Wendy. Wendy is thirteen years old. What is the sum of their ages?

Write an even number.

$$7 + 4 - 2 - 4$$

3 more than 363

If you know
 $76 + 27 = 103$
Then what is $76 + 25$?

14, 16, 18, 20, 22, 24, 26,
_____, 30, 32

$$\begin{array}{r} 446 \\ + 57 \\ \hline \end{array}$$

Find a clock. What time is it right now?

Name: _____

Fill in the blanks.

$$7 + 7 = 7 \times \underline{\quad}$$

$$2 + 2 + 2 + 2 + 2 = 2 \times \underline{\quad}$$

$$9 + 9 + 9 + 9 = 9 \times \underline{\quad}$$

$$8 + 8 + 8 = 8 \times \underline{\quad}$$

	3	6
-		7
<hr/>		

Make your own equation.

$$\underline{\quad} - 5 = \underline{\quad}$$

F, H, J, L, N, P, R, T, V,

_____, Z

Mary has a bowl. She puts 11 nickels into the bowl. Jason sees the bowl and takes 2 nickels. How much money (in cents) is left in the bowl?

Circle the three numbers whose sum equals 19.

4 9 3
5 4 10

The party is at 1 p.m. In only 14 minutes the party starts. What time is it right now?

Name: _____

Guess what you have to do on the Name That Number app? You guessed it! You name the correct number. For 50 gold stars, here is the clue. The number rounded to the nearest 10 is 160. The ones digit is 4. Quick! If you can write the answer in 30 seconds, you get 15 bonus gold stars!

$$\begin{array}{r} 376 \\ - 80 \\ \hline \end{array}$$

D, I, N, _____, X

6 tens, 3 hundreds, 4 thousands, 7 ones

$$\begin{array}{r} 78 \\ + 6 \\ \hline \end{array}$$

It is 8:46 when Emily leaves her house. She arrives at school at 9:09. How much time has passed?

6 tens, 5 ones, 9 thousands

Circle the complete subject.

Mom and I went on a picnic.

Change the present tense verb to the past tense.

appear

Name: _____



	+1	-1	+10	-10	+4	-4
81						
44						
67						
72						
55						
226						
830						
329						
558						
763						

Name: _____

Make a path by adding up the numbers. Do not visit a circle more than once. The first one is done.

START 9	6	5	8
7	4	8	5
2	9	6	FINISH SUM: 35

9 + 7 + 4 + 9 +
6 = 35

START 8	7	1	7
9	4	7	8
3	7	4	FINISH SUM: 27

8 + 7 + ___ + ___ +
___ = 27

START 8	6	7	8
9	8	8	6
6	6	7	FINISH SUM: 50





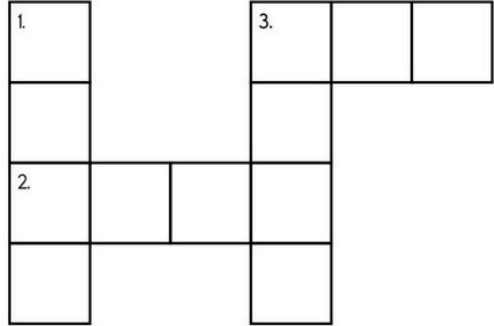
8 + 9 + 6 + ___ +
___ + ___ + ___ = 50

START 7	6	9	2
5	9	4	7
2	5	6	FINISH SUM: 33

7 + ___ + ___ + ___ +
___ = 33

Name: _____

+		3		3		11	
				5		13	
	__+__	__+3	__+__	__+3	__+__	__+11	__+__
			13				
	__+__	__+3	__+__	__+3	__+__	__+11	__+__
7					9		15
	7+__	7+3	7+__	7+3	7+__	7+11	7+__
		5				13	
	__+__	__+3	__+__	__+3	__+__	__+11	__+__
2		5					10
	2+__	2+3	2+__	2+3	2+__	2+11	2+__
8			14		10		
	8+__	8+3	8+__	8+3	8+__	8+11	8+__
5	16						13
	5+__	5+3	5+__	5+3	5+__	5+11	5+__

<p>across →</p> <p>2.  __wi__</p> <p>3.  __ar</p>	<p>down ↓</p> <p>1.  __a__e</p> <p>3.  __u__p</p>	
--	--	--

word root **enni** can mean **year** **bicentennial, centennial, perennial**

Name: _____

What happens when you add an odd and an even number together?

$5 + 8 = \underline{\quad}$

$10 + 1 = \underline{\quad}$

$6 + 1 = \underline{\quad}$

$11 + 2 = \underline{\quad}$

$2 + 1 = \underline{\quad}$

$3 + 10 = \underline{\quad}$

$10 + 5 = \underline{\quad}$

$11 + 6 = \underline{\quad}$

$2 + 11 = \underline{\quad}$

When you add odd and even numbers together,

the sum will always be _____.

Emily just got a phone. The first day she got the phone she played for only 6 minutes. Every day after that she doubled how much time she played on her phone. On day 3 how long did she play on her phone?

Name: _____

Adding and Subtracting 12

$13 + 12 = \underline{\quad}$ $18 - 12 = \underline{\quad}$ $29 - 17 = \underline{\quad}$ $22 - 10 = \underline{\quad}$

$22 + 12 = \underline{\quad}$ $12 + 5 = \underline{\quad}$ $33 - 12 = \underline{\quad}$ $12 + 1 = \underline{\quad}$

$6 + 12 = \underline{\quad}$ $10 + 12 = \underline{\quad}$ $16 - 12 = \underline{\quad}$ $23 - 11 = \underline{\quad}$

$38 - 12 = \underline{\quad}$ $21 - 9 = \underline{\quad}$ $12 + 2 = \underline{\quad}$ $12 + 28 = \underline{\quad}$

$12 + 12 = \underline{\quad}$ $24 - 12 = \underline{\quad}$ $15 - 12 = \underline{\quad}$ $26 + 12 = \underline{\quad}$

$$\begin{array}{r} 28 \\ + 12 \\ \hline \end{array}$$

$$\begin{array}{r} 40 \\ - 12 \\ \hline \end{array}$$

$$\begin{array}{r} 17 \\ + 12 \\ \hline \end{array}$$

$$\begin{array}{r} 29 \\ - 17 \\ \hline \end{array}$$

$$\begin{array}{r} 1 \\ + 12 \\ \hline \end{array}$$

$$\begin{array}{r} 13 \\ - 12 \\ \hline \end{array}$$

$$\begin{array}{r} 9 \\ + 12 \\ \hline \end{array}$$

$$\begin{array}{r} 21 \\ - 9 \\ \hline \end{array}$$

$$\begin{array}{r} 26 \\ + 12 \\ \hline \end{array}$$

$$\begin{array}{r} 38 \\ - 12 \\ \hline \end{array}$$

$$\begin{array}{r} 27 \\ + 12 \\ \hline \end{array}$$

$$\begin{array}{r} 39 \\ - 27 \\ \hline \end{array}$$

$$\begin{array}{r} 15 \\ + 12 \\ \hline \end{array}$$

$$\begin{array}{r} 27 \\ - 12 \\ \hline \end{array}$$

$$\begin{array}{r} 29 \\ + 12 \\ \hline \end{array}$$

$$\begin{array}{r} 41 \\ - 12 \\ \hline \end{array}$$

$$\begin{array}{r} 7 \\ + 12 \\ \hline \end{array}$$

$$\begin{array}{r} 19 \\ - 7 \\ \hline \end{array}$$

$$\begin{array}{r} 6 \\ + 12 \\ \hline \end{array}$$

$$\begin{array}{r} 18 \\ - 12 \\ \hline \end{array}$$

$$\begin{array}{r} 24 \\ + 12 \\ \hline \end{array}$$

$$\begin{array}{r} 36 \\ - 24 \\ \hline \end{array}$$

$$\begin{array}{r} 23 \\ + 12 \\ \hline \end{array}$$

$$\begin{array}{r} 35 \\ - 12 \\ \hline \end{array}$$

$$\begin{array}{r} 10 \\ + 12 \\ \hline \end{array}$$

$$\begin{array}{r} 22 \\ - 10 \\ \hline \end{array}$$

$$\begin{array}{r} 14 \\ + 12 \\ \hline \end{array}$$

$$\begin{array}{r} 26 \\ - 14 \\ \hline \end{array}$$

$$\begin{array}{r} 3 \\ + 12 \\ \hline \end{array}$$

$$\begin{array}{r} 15 \\ - 12 \\ \hline \end{array}$$

$$\begin{array}{r} 21 \\ + 12 \\ \hline \end{array}$$

$$\begin{array}{r} 33 \\ - 12 \\ \hline \end{array}$$

$$\begin{array}{r} 8 \\ + 12 \\ \hline \end{array}$$

$$\begin{array}{r} 20 \\ - 8 \\ \hline \end{array}$$

$$\begin{array}{r} 2 \\ + 12 \\ \hline \end{array}$$

$12 + 24 = \underline{\quad}$ $36 - 24 = \underline{\quad}$ $12 + 15 = \underline{\quad}$ $8 + 12 = \underline{\quad}$

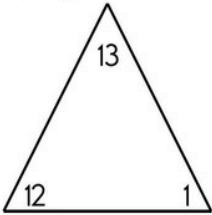
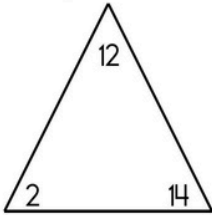
$12 + 29 = \underline{\quad}$ $30 - 18 = \underline{\quad}$ $2 + 12 = \underline{\quad}$ $18 - 12 = \underline{\quad}$

$40 - 12 = \underline{\quad}$ $12 + 19 = \underline{\quad}$ $18 - 12 = \underline{\quad}$ $31 - 19 = \underline{\quad}$

Name: _____

Adding and Subtracting 12

$24 + 12 = \underline{\quad}$	$12 + 23 = \underline{\quad}$	$29 - 12 = \underline{\quad}$	$12 - 12 = \underline{\quad}$
$1 + 12 = \underline{\quad}$	$12 + 20 = \underline{\quad}$	$12 - 11 = \underline{\quad}$	$12 + 6 = \underline{\quad}$
$20 - 12 = \underline{\quad}$	$25 - 13 = \underline{\quad}$	$16 + 12 = \underline{\quad}$	$21 - 9 = \underline{\quad}$
$9 + 12 = \underline{\quad}$	$12 - 9 = \underline{\quad}$	$12 + 15 = \underline{\quad}$	$25 - 13 = \underline{\quad}$
$28 - 12 = \underline{\quad}$	$36 - 24 = \underline{\quad}$	$4 + 12 = \underline{\quad}$	$36 - 24 = \underline{\quad}$
$29 + 12 = \underline{\quad}$	$27 - 12 = \underline{\quad}$	$20 - 12 = \underline{\quad}$	$12 - 11 = \underline{\quad}$
$21 - 9 = \underline{\quad}$	$41 - 12 = \underline{\quad}$	$21 - 9 = \underline{\quad}$	$22 + 12 = \underline{\quad}$
$41 - 12 = \underline{\quad}$	$12 + 12 = \underline{\quad}$	$34 - 22 = \underline{\quad}$	$12 - 4 = \underline{\quad}$
$30 - 18 = \underline{\quad}$	$12 + 8 = \underline{\quad}$	$39 - 27 = \underline{\quad}$	$15 - 12 = \underline{\quad}$

<p>Fill in the blanks using numbers from the fact family.</p>  <p><input type="text"/> + <input type="text"/> = <input type="text"/></p> <p><input type="text"/> + <input type="text"/> = <input type="text"/></p> <p><input type="text"/> - <input type="text"/> = <input type="text"/></p> <p><input type="text"/> - <input type="text"/> = <input type="text"/></p>	<p>Fill in the blanks using numbers from the fact family.</p>  <p><input type="text"/> + <input type="text"/> = <input type="text"/></p> <p><input type="text"/> + <input type="text"/> = <input type="text"/></p> <p><input type="text"/> - <input type="text"/> = <input type="text"/></p> <p><input type="text"/> - <input type="text"/> = <input type="text"/></p>
---	--



Name: _____

Get a fidget spinner! Spin it.

I needed to spin _____ time(s) to finish.

$$\begin{array}{r} 10 \\ + 96 \\ \hline \end{array}$$

$$\begin{array}{r} 39 \\ - 29 \\ \hline \end{array}$$

$$\begin{array}{r} 40 \\ - 25 \\ \hline \end{array}$$

$$\begin{array}{r} 10 \\ + 86 \\ \hline \end{array}$$

$$\begin{array}{r} 91 \\ - 69 \\ \hline \end{array}$$

$$\begin{array}{r} 47 \\ + 78 \\ \hline \end{array}$$

$$\begin{array}{r} 16 \\ + 60 \\ \hline \end{array}$$

$$\begin{array}{r} 49 \\ - 24 \\ \hline \end{array}$$

$$\begin{array}{r} 70 \\ + 84 \\ \hline \end{array}$$

$$\begin{array}{r} 75 \\ - 32 \\ \hline \end{array}$$

$$\begin{array}{r} 43 \\ - 19 \\ \hline \end{array}$$

$$\begin{array}{r} 33 \\ + 24 \\ \hline \end{array}$$

$$\begin{array}{r} 99 \\ + 12 \\ \hline \end{array}$$

$$\begin{array}{r} 40 \\ - 37 \\ \hline \end{array}$$

$$\begin{array}{r} 96 \\ - 92 \\ \hline \end{array}$$

$$\begin{array}{r} 39 \\ + 91 \\ \hline \end{array}$$

$$\begin{array}{r} 29 \\ + 20 \\ \hline \end{array}$$

$$\begin{array}{r} 71 \\ - 21 \\ \hline \end{array}$$

$$\begin{array}{r} 40 \\ + 73 \\ \hline \end{array}$$

$$\begin{array}{r} 58 \\ + 65 \\ \hline \end{array}$$

$$\begin{array}{r} 98 \\ - 68 \\ \hline \end{array}$$

$$\begin{array}{r} 98 \\ - 27 \\ \hline \end{array}$$

$$\begin{array}{r} 73 \\ + 22 \\ \hline \end{array}$$

$$\begin{array}{r} 92 \\ - 35 \\ \hline \end{array}$$

$$\begin{array}{r} 64 \\ - 27 \\ \hline \end{array}$$

$$\begin{array}{r} 61 \\ + 59 \\ \hline \end{array}$$

$$\begin{array}{r} 35 \\ - 28 \\ \hline \end{array}$$

$$\begin{array}{r} 77 \\ - 18 \\ \hline \end{array}$$

$$\begin{array}{r} 40 \\ + 13 \\ \hline \end{array}$$

$$\begin{array}{r} 54 \\ + 30 \\ \hline \end{array}$$



Name: _____

Spin again.

I needed to spin _____ time(s) to finish.

$$\begin{array}{r} 13334 \\ - 7892 \\ \hline \end{array}$$

$$\begin{array}{r} 17154 \\ - 8024 \\ \hline \end{array}$$

$$\begin{array}{r} 15295 \\ - 2192 \\ \hline \end{array}$$

$$\begin{array}{r} 12587 \\ - 2898 \\ \hline \end{array}$$

$$\begin{array}{r} 43887 \\ + 4282 \\ \hline \end{array}$$

$$\begin{array}{r} 79178 \\ + 5331 \\ \hline \end{array}$$

$$\begin{array}{r} 52775 \\ - 3661 \\ \hline \end{array}$$

$$\begin{array}{r} 46892 \\ + 9222 \\ \hline \end{array}$$

$$\begin{array}{r} 88554 \\ - 2830 \\ \hline \end{array}$$

$$\begin{array}{r} 48866 \\ - 2480 \\ \hline \end{array}$$

$$\begin{array}{r} 70413 \\ - 7635 \\ \hline \end{array}$$

$$\begin{array}{r} 66250 \\ + 4044 \\ \hline \end{array}$$

$$\begin{array}{r} 32480 \\ + 5353 \\ \hline \end{array}$$

$$\begin{array}{r} 29624 \\ - 9524 \\ \hline \end{array}$$

$$\begin{array}{r} 83512 \\ + 8278 \\ \hline \end{array}$$

Name: _____

Ava is playing a game against Emma. In the game you collect gold coins. You can also get hearts. Every heart is exchanged for 2 gold coins at the end of the game. Ava got 300 gold coins and 29 hearts. Emma got 36 gold coins and 70 hearts. The game ended and they exchanged hearts for gold coins. Who won?

$5 + 1 - 3$

$5 - 3 + 6 - 3 + 2$

9 thousands, 8 hundreds

Circle the number that is smallest.

8,080 8,800

8,008

How many hours are there from 5 a.m. to 7 p.m.?

double 600

$13 + \square = 15$

$5 + \square = 13$

$6 + \square = 19$

$4 + \square = 6$

$8 + \square = 23$

$13 + \square = 18$

$9 + \square = 14$

$5 + \square = 17$

Name: _____

$$90 = \underline{\hspace{2cm}} \text{ tens}$$

$$2,270 = \underline{\hspace{2cm}} \text{ tens}$$

$$180 = \underline{\hspace{2cm}} \text{ tens}$$

$$790 = \underline{\hspace{2cm}} \text{ tens}$$

Make your own
equation.

$$\underline{\hspace{1cm}} + 8 = \underline{\hspace{1cm}}$$

double 80

Round 47 to the nearest 10.

56, _____, 84, 98, 112, 126,

140, 154, 168, 182

$$79 + 79 + 79$$

Change this into a
multiplication problem.

$$\underline{\hspace{1cm}} \times \underline{\hspace{1cm}}$$

$$4 + 3 - 3$$

word root **vert** can mean **turn**

extrovert, revert

Name: _____

$$\begin{array}{r} 10 \\ - 6 \\ \hline \end{array}$$

$$\begin{array}{r} 10 \\ - 2 \\ \hline \end{array}$$

$$\begin{array}{r} 12 \\ - 10 \\ \hline \end{array}$$

$$\begin{array}{r} 6 \\ - 4 \\ \hline \end{array}$$

$$\begin{array}{r} 12 \\ - 2 \\ \hline \end{array}$$

$$\begin{array}{r} 8 \\ - 3 \\ \hline \end{array}$$

$$\begin{array}{r} 12 \\ - 12 \\ \hline \end{array}$$

$$\begin{array}{r} 4 \\ - 3 \\ \hline \end{array}$$

$$\begin{array}{r} 8 \\ - 4 \\ \hline \end{array}$$

$$\begin{array}{r} 10 \\ - 2 \\ \hline \end{array}$$

$$\begin{array}{r} 10 \\ - 4 \\ \hline \end{array}$$

$$\begin{array}{r} 7 \\ - 2 \\ \hline \end{array}$$



$11 - \underline{\quad} = 2$

$\underline{\quad} - 9 = 2$

$\underline{\quad} - 2 = 10$

$5 - \underline{\quad} = 1$

$\underline{\quad} - 5 = 3$

$8 - \underline{\quad} = 6$

$2 - \underline{\quad} = 0$

$\underline{\quad} - 2 = 6$

$\underline{\quad} - 6 = 6$

$10 - \underline{\quad} = 4$

$\underline{\quad} - 4 = 7$

$10 - \underline{\quad} = 2$



$12 - 4 =$

$5 - 2 =$

$8 - 4 =$

$7 - 4 =$

$12 - 2 =$

$9 - 7 =$

$11 - 6 =$

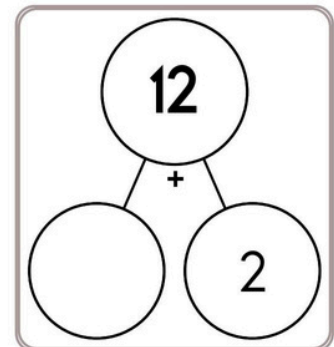
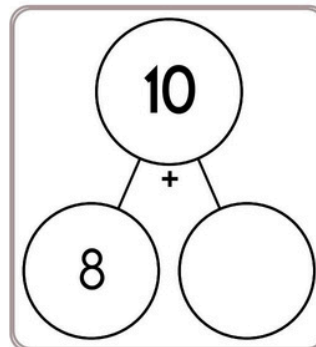
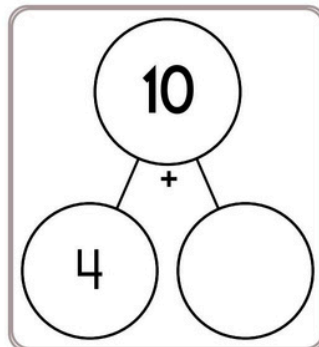
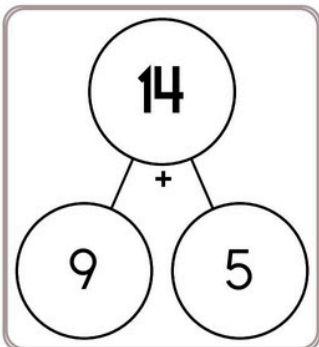
$10 - 2 =$

$11 - 4 =$

$7 - 6 =$

$5 - 5 =$

$11 - 2 =$



Name: _____

$$\begin{array}{r} 512 \\ + 132 \\ \hline \end{array}$$

$$\begin{array}{r} 181 \\ + 659 \\ \hline \end{array}$$

$$\begin{array}{r} 787 \\ + 949 \\ \hline \end{array}$$

$$\begin{array}{r} 700 \\ + 759 \\ \hline \end{array}$$

$$\begin{array}{r} 231 \\ + 929 \\ \hline \end{array}$$

$$\begin{array}{r} 784 \\ + 6\ \square\ 9 \\ \hline \square\ 4\ \square\ 3 \end{array}$$

$$\begin{array}{r} 554 \\ + 28\square \\ \hline \square\ 3\ 7 \end{array}$$

$$\begin{array}{r} \square\square\ 9 \\ + 14\square \\ \hline 501 \end{array}$$

$$\begin{array}{r} 44\square \\ + \square\square\ 3 \\ \hline 1248 \end{array}$$

$$\begin{array}{r} 832 \\ + \square\ 6\ 0 \\ \hline 1\square\square\ 2 \end{array}$$

$$\begin{array}{r} 305 \\ + 744 \\ \hline \end{array}$$

$$\begin{array}{r} 293 \\ + 174 \\ \hline \end{array}$$

$$\begin{array}{r} 314 \\ + 677 \\ \hline \end{array}$$

$$\begin{array}{r} 581 \\ + 570 \\ \hline \end{array}$$

$$\begin{array}{r} 183 \\ + 610 \\ \hline \end{array}$$

$$\begin{array}{r} 2\square\square\ 0 \\ + \square\ 6\ 7 \\ \hline 9\square\ 7 \end{array}$$

$$\begin{array}{r} 8\square\ 4 \\ + \square\ 9\ 1 \\ \hline 17\square\ 5 \end{array}$$

$$\begin{array}{r} \square\ 2\ 3 \\ + 357 \\ \hline 1\square\square\ 0 \end{array}$$

$$\begin{array}{r} 4\square\square \\ + \square\ 5\ 4 \\ \hline 733 \end{array}$$

$$\begin{array}{r} 629 \\ + \square\ 4\square \\ \hline 1\square\ 7\ 2 \end{array}$$

$$\begin{array}{r} 762 \\ + 507 \\ \hline \end{array}$$

$$\begin{array}{r} 754 \\ + 723 \\ \hline \end{array}$$

$$\begin{array}{r} 444 \\ + 753 \\ \hline \end{array}$$

$$\begin{array}{r} 885 \\ + 692 \\ \hline \end{array}$$

$$\begin{array}{r} 369 \\ + 490 \\ \hline \end{array}$$

$$\begin{array}{r} 48\square \\ + 9\square\ 6 \\ \hline \square\ 4\ 4\ 8 \end{array}$$

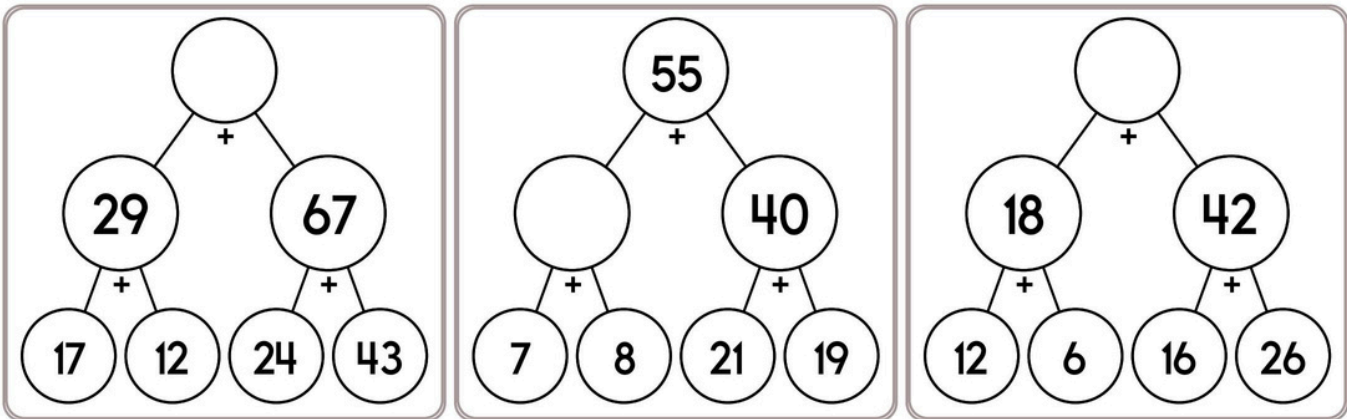
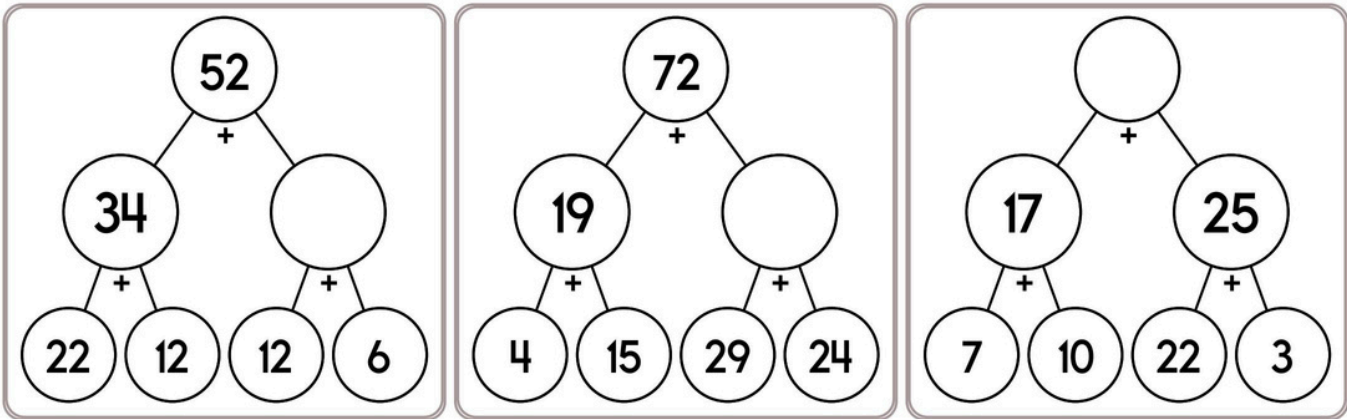
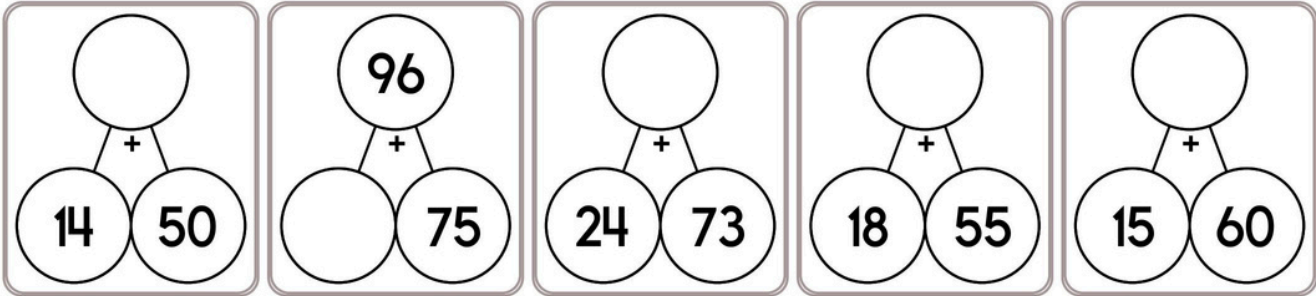
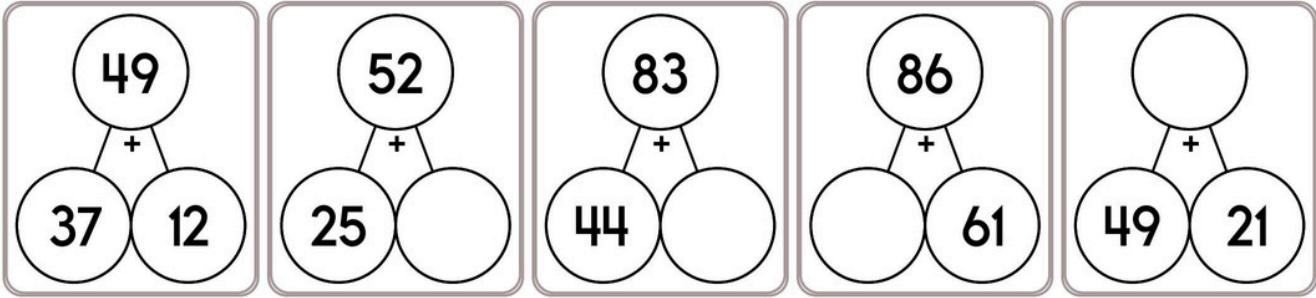
$$\begin{array}{r} \square\ 2\ 6 \\ + \square\ 3\square \\ \hline 1\square\ 5\ 8 \end{array}$$

$$\begin{array}{r} \square\ 9\ 0 \\ + 1\square\ 1 \\ \hline 6\square\ 1 \end{array}$$

$$\begin{array}{r} \square\ 6\square \\ + 9\square\ 6 \\ \hline 11\square\ 0 \end{array}$$

$$\begin{array}{r} 31\square \\ + 2\square\ 4 \\ \hline 526 \end{array}$$

Name: _____



Make your own equation.

___ + 6 = ___

19, 38, _____, 76, 95, 114

It is 7:49 when Anna leaves her house. She arrives at school at 8:03. How much time has passed?

Name: _____

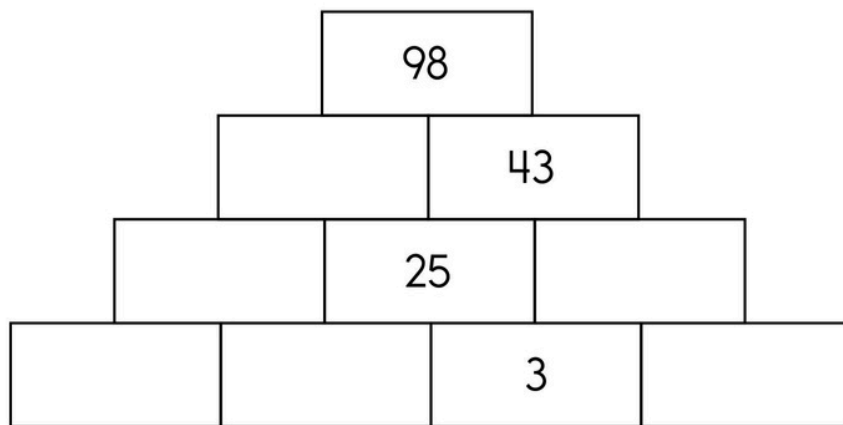
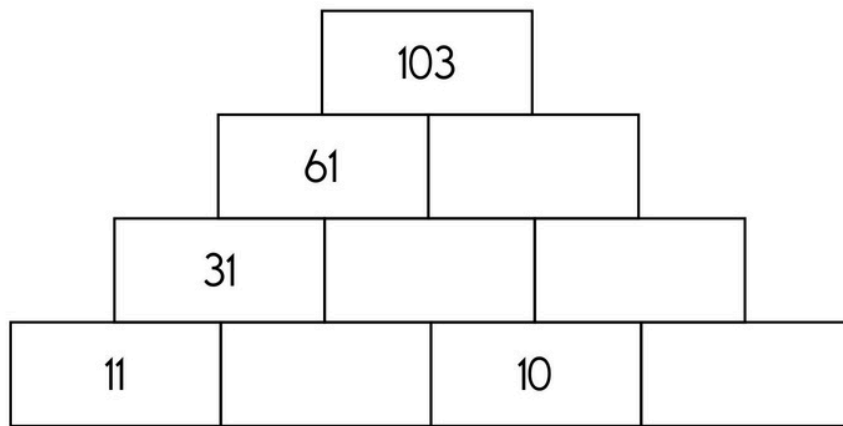
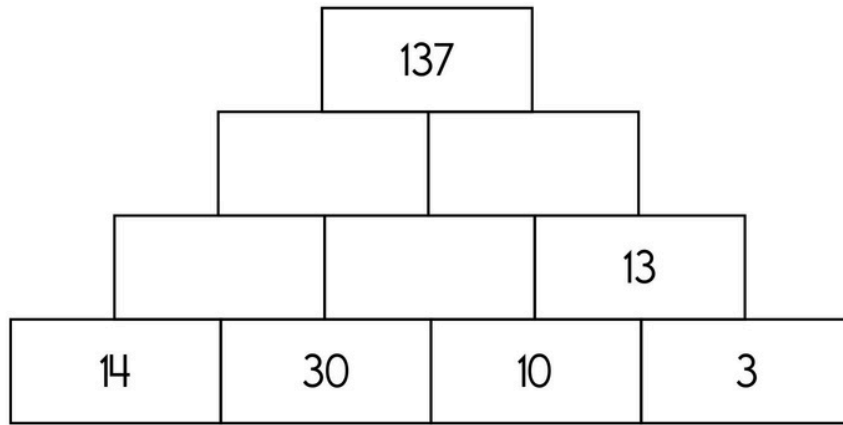
<p>Robert cooked 8 slices of bacon. He has 4 plates. He put the same amount on each plate. How many slices did he put on each plate?</p>	<p>There are 10 boys in second grade. Each boy set 4 goals. How many goals did they set in all?</p>	<p>A box of oatmeal costs \$1.26. Connor gave the clerk \$2 for a box. How much change did he get?</p>
--	---	--

$2 \overline{)16}$ $6 \overline{)48}$	<p>Complete each analogy with the best word.</p> <table border="1" style="margin-left: auto; margin-right: auto;"> <tr> <td>cat</td> <td>Memorial in America</td> </tr> <tr> <td>eel</td> <td>tree</td> </tr> <tr> <td>May It Always</td> <td>bird</td> </tr> <tr> <td>Missing in America</td> <td>Missing in Action</td> </tr> </table> <p>two legs : human :: four legs : _____</p> <p>etc. : et cetera :: MIA : _____</p>	cat	Memorial in America	eel	tree	May It Always	bird	Missing in America	Missing in Action
cat	Memorial in America								
eel	tree								
May It Always	bird								
Missing in America	Missing in Action								

$5 \overline{)40}$ $4 \overline{)8}$ $9 \overline{)27}$	$17 + 2 = \underline{\quad}$ $10 \times 2 = \underline{\quad}$
$2 \overline{)12}$ $3 \overline{)21}$ $2 \overline{)6}$	$8 + \square = 33$

Name: _____

The block above is the sum of the two blocks below. Fill in the missing blocks.











<p>Count by 7s.</p> <p>39 _____ _____ _____ 67 _____</p>	<p>$1 \times 8 = \underline{\hspace{2cm}}$</p> <p>$4 \times 12 = \underline{\hspace{2cm}}$</p>
---	--

word root **avi** can mean **bird** **aviary, aviator**

Name: _____

Count by 3s.

Draw ONE continuous line that touches every box ONCE.
 Count by 3s. Find the box with the number 3. Move up, down, right, or left.
 Keep counting until you reach 60. Do not move into a spot with a picture.

				33 - - - -		
				6 - - - - 3		
						
				60		-18

$\begin{array}{r} 47 \\ + 74 \\ \hline \end{array}$	$\begin{array}{r} 47 \\ + 72 \\ \hline \end{array}$
---	---

<p>Fill in the blanks with these numbers: 2, 9, 1</p> $\begin{array}{r} 3 \quad \square \\ - \square \quad 5 \\ \hline \square \quad 4 \end{array}$	<p>Fill in the blanks with these numbers: 3, 1, 2</p> $\begin{array}{r} \square \quad 4 \\ - \square \quad \square \\ \hline 1 \quad 3 \end{array}$
---	---

$7 \overline{)63}$
$8 \overline{)64}$

$97 + 3 = \underline{\hspace{2cm}}$

How many days are there in two full weeks?

Write + or - in the circles.

6 ○ 1 ○ 3 = 9 ○ 3 ○ 2

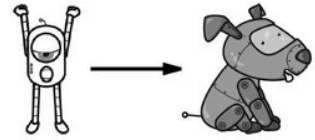
8 ○ 2 ○ 5 = 1 ○ 6 ○ 2

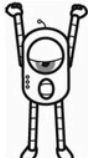

$54 - 6 = \underline{\hspace{2cm}}$

$18 + \square = 31$

Name: _____

Help Robot find Rover. Color the boxes with odd sums to make a path.



	$\begin{array}{r} 12 \\ + 8 \\ \hline \end{array}$	$\begin{array}{r} 8 \\ + 7 \\ \hline \end{array}$	$\begin{array}{r} 3 \\ + 1 \\ \hline \end{array}$	$\begin{array}{r} 6 \\ + 8 \\ \hline \end{array}$	$\begin{array}{r} 13 \\ + 7 \\ \hline \end{array}$	$\begin{array}{r} 10 \\ + 6 \\ \hline \end{array}$	$\begin{array}{r} 10 \\ + 8 \\ \hline \end{array}$	$\begin{array}{r} 15 \\ + 7 \\ \hline \end{array}$
$\begin{array}{r} 17 \\ + 8 \\ \hline \end{array}$	$\begin{array}{r} 8 \\ + 1 \\ \hline \end{array}$	$\begin{array}{r} 10 \\ + 7 \\ \hline \end{array}$	$\begin{array}{r} 13 \\ + 4 \\ \hline \end{array}$	$\begin{array}{r} 7 \\ + 4 \\ \hline \end{array}$	$\begin{array}{r} 15 \\ + 4 \\ \hline \end{array}$	$\begin{array}{r} 6 \\ + 1 \\ \hline \end{array}$	$\begin{array}{r} 15 \\ + 8 \\ \hline \end{array}$	$\begin{array}{r} 5 \\ + 3 \\ \hline \end{array}$
$\begin{array}{r} 18 \\ + 10 \\ \hline \end{array}$	$\begin{array}{r} 14 \\ + 6 \\ \hline \end{array}$	$\begin{array}{r} 13 \\ + 1 \\ \hline \end{array}$	$\begin{array}{r} 8 \\ + 4 \\ \hline \end{array}$	$\begin{array}{r} 4 \\ + 5 \\ \hline \end{array}$	$\begin{array}{r} 14 \\ + 6 \\ \hline \end{array}$	$\begin{array}{r} 5 \\ + 7 \\ \hline \end{array}$	$\begin{array}{r} 19 \\ + 2 \\ \hline \end{array}$	$\begin{array}{r} 4 \\ + 6 \\ \hline \end{array}$
$\begin{array}{r} 8 \\ + 5 \\ \hline \end{array}$	$\begin{array}{r} 14 \\ + 7 \\ \hline \end{array}$	$\begin{array}{r} 16 \\ + 7 \\ \hline \end{array}$	$\begin{array}{r} 16 \\ + 3 \\ \hline \end{array}$	$\begin{array}{r} 2 \\ + 7 \\ \hline \end{array}$	$\begin{array}{r} 5 \\ + 8 \\ \hline \end{array}$	$\begin{array}{r} 12 \\ + 9 \\ \hline \end{array}$	$\begin{array}{r} 12 \\ + 9 \\ \hline \end{array}$	$\begin{array}{r} 2 \\ + 2 \\ \hline \end{array}$
$\begin{array}{r} 8 \\ + 3 \\ \hline \end{array}$	$\begin{array}{r} 2 \\ + 9 \\ \hline \end{array}$	$\begin{array}{r} 8 \\ + 2 \\ \hline \end{array}$	$\begin{array}{r} 18 \\ + 1 \\ \hline \end{array}$	$\begin{array}{r} 1 \\ + 5 \\ \hline \end{array}$	$\begin{array}{r} 15 \\ + 9 \\ \hline \end{array}$	$\begin{array}{r} 14 \\ + 8 \\ \hline \end{array}$	$\begin{array}{r} 18 \\ + 8 \\ \hline \end{array}$	$\begin{array}{r} 19 \\ + 3 \\ \hline \end{array}$
$\begin{array}{r} 12 \\ + 2 \\ \hline \end{array}$	$\begin{array}{r} 9 \\ + 4 \\ \hline \end{array}$	$\begin{array}{r} 5 \\ + 8 \\ \hline \end{array}$	$\begin{array}{r} 3 \\ + 6 \\ \hline \end{array}$	$\begin{array}{r} 15 \\ + 2 \\ \hline \end{array}$	$\begin{array}{r} 10 \\ + 9 \\ \hline \end{array}$	$\begin{array}{r} 6 \\ + 3 \\ \hline \end{array}$	$\begin{array}{r} 11 \\ + 4 \\ \hline \end{array}$	$\begin{array}{r} 2 \\ + 9 \\ \hline \end{array}$
$\begin{array}{r} 1 \\ + 7 \\ \hline \end{array}$	$\begin{array}{r} 7 \\ + 5 \\ \hline \end{array}$	$\begin{array}{r} 19 \\ + 3 \\ \hline \end{array}$	$\begin{array}{r} 11 \\ + 3 \\ \hline \end{array}$	$\begin{array}{r} 12 \\ + 4 \\ \hline \end{array}$	$\begin{array}{r} 12 \\ + 4 \\ \hline \end{array}$	$\begin{array}{r} 5 \\ + 9 \\ \hline \end{array}$	$\begin{array}{r} 3 \\ + 1 \\ \hline \end{array}$	

Name: _____

Find the missing numbers. These both have the same rule. What is the rule?

If

$$1, 3 = 4$$

$$2, 7 = 9$$

$$3, 11 = 14$$

$$4, 16 = 20$$

Then

$$5, 19 = ?$$

If

$$6, 5 = 11$$

$$7, 9 = 16$$

$$8, 14 = 22$$

$$9, 19 = 28$$

Then

$$10, 24 = ?$$

Find the missing numbers. These both have the same rule. What is the rule?

If

$$1, 10 = 11$$

$$2, 15 = 17$$

$$3, 17 = 20$$

$$4, 21 = 25$$

Then

$$5, 26 = ?$$

If

$$5, 6 = 11$$

$$6, 11 = 17$$

$$7, 14 = 21$$

$$8, 16 = 24$$

Then

$$9, 20 = ?$$

Name: _____

Make change. You can use \$20, \$10, \$5, \$1, 25¢, 10¢, 5¢, or 1¢.

Use the fewest bills and coins to make \$53.18.

\$20				
------	--	--	--	--

--

			1¢	
--	--	--	----	--

Use the fewest bills and coins to make \$34.54.

--	--	--	--	--

--

--	--	--	--	--	--

Use the fewest bills and coins to make \$51.48.

Use the fewest bills and coins to make \$55.24.

word root **scrib** can mean **written or write**

indescribable

Name: _____

There were 13 crows in the tree. Then 15 more birds joined them. How many birds were in the tree?

Jenna read 34 pages of her book on Quiet Day. Her sister read 46 pages of her book. How many pages did the girls read in all?

Jacob spent 49 minutes working on a card for his grandmother on Monday. He spent 35 minutes working on the card on Tuesday. How much longer did he spend on Monday than on Tuesday?

Jason had 10 white socks. He had some blue socks. He had 14 socks altogether. How many blue socks did he have?

The rat-catcher caught 789 rats today. What is the greatest number you can make from the digits 7, 8, and 9?

Rosa took 1 quarter, 2 dimes, 3 nickels, and 8 pennies to the store to buy erasers. How much money did she take to the store?

In eleven hours it will be midnight. What time is it now?

$$5 - 4 + 5$$

Find a clock. What time is it right now?

Name: _____

Justin is painting his best friend's house. His best friend is his dog. He painted a pattern around the door. First he painted a square. Next he painted a circle. Then he painted a triangle. After that he painted a square. If he continues the pattern, what will he paint next?

Nathan and Sara drew a picture of a dinosaur on the school parking lot. The picture was as big as the real dinosaur! They used four boxes of sidewalk chalk to color in the dinosaur. Each box had eleven pieces of chalk. How many pieces of chalk did they use to color in the dinosaur?

Peter shared his bag of jelly beans with his friends. The 4 boys divided 36 jelly beans equally. How many did each boy get?

Jacob likes bad poems! He copies bad poems and puts them in a box to read again and again. The box is 2.2 ft long and 1 ft wide. What is the perimeter of the box?

A penguin can travel about 15 miles per hour in the water. How far could a penguin go in 3 hours?

3 more than 643

Make your own equation.

$$\underline{\quad} + 5 = \underline{\quad}$$

	3	7	6
+	9	9	
<hr/>			

Name: _____

Gavin has a box of dog biscuits. There are 30 biscuits in the box. There are 10 green and 12 brown biscuits. The other biscuits are white. How many biscuits are white?

Mary has 25 long books and 13 short books. How many books does she have in all?

Hunter, Max, and Jack each bought an ice cream soda. It took 15 minutes to drink the sodas. They were very good. An ice cream cone costs 48¢. Each soda cost 85¢. How much did they spend in all?

Name: _____

CHALLENGE YOUR CLASSMATES!

(OR SIBLING OR PARENT)

Play against someone!



edhelper.com/math-games.htm

Pick your grade. Then play to challenge someone else.



Date played:

Whom I challenged:

Who won?

Explain what you learned from one math problem you got wrong.



5 more than 675

double 500

20, _____, 30, 35, 40, 45,
50, 55, 60

Name: _____

Ready to make equations? There is a missing equation in each box.
Circle the numbers once you find it!

A

52	41	38
9	84	15
66	18	39

Find an addition fact.

B

62	86	71
80	28	60
52	36	12

Find an addition fact.

C

50	46	11
17	75	47
87	82	70

Find an addition fact.

Equations:

Write the equation facts you found.

A	18	+	66	=	84
B		+		=	80
C		+	17	=	

Color in $\frac{2}{3}$ of the rectangle.



Color in $\frac{3}{4}$ of the rectangle.



Fill in the blanks with these numbers:
2, 9, 2

5	4	
<input style="width: 30px; height: 20px;" type="text"/>	2	
+	2	<input style="width: 30px; height: 20px;" type="text"/>
<input style="width: 30px; height: 20px;" type="text"/>	8	

Fill in the blanks with these numbers:
4, 3, 0

5	<input style="width: 30px; height: 20px;" type="text"/>	
3	<input style="width: 30px; height: 20px;" type="text"/>	
+	1	<input style="width: 30px; height: 20px;" type="text"/>
9	7	

word root **tact** can mean **touch** **tactile, tactful**

Name: _____

This puzzle has a large number in the middle, which is the sum of the four numbers that surround it.

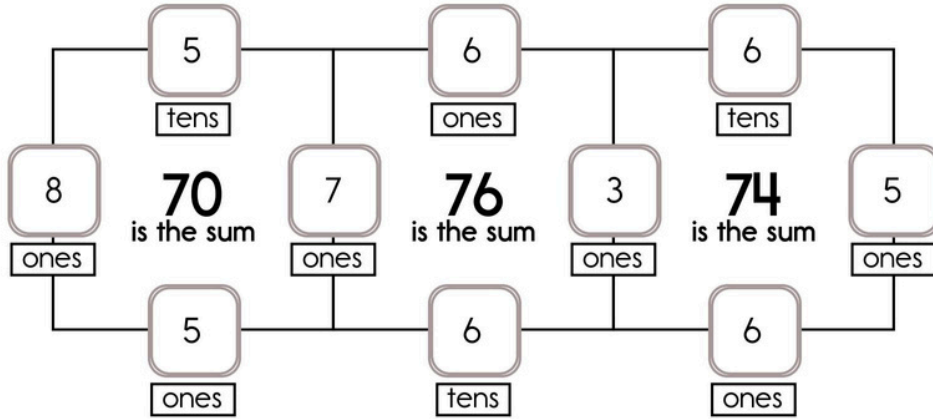
Example:

$$8 + 7 + 50 + 5 = 70$$

Example:

$$3 + 5 + 60 + 6 = 74$$

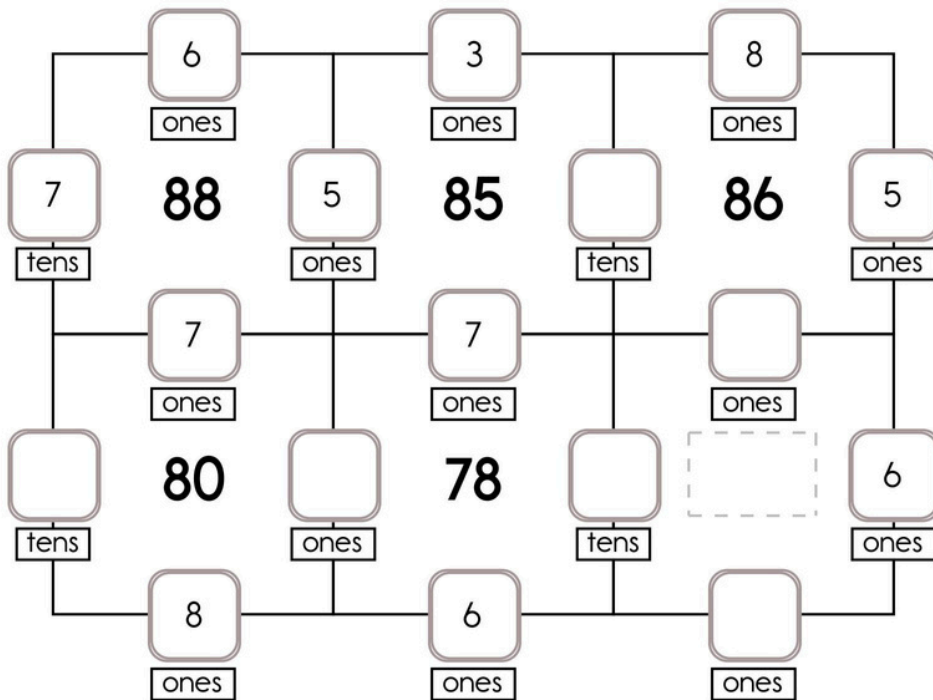
Sample:



Fill in the missing numbers. How? The sum of the four surrounding numbers is in the center of each square.

Exactly one of the four numbers has to be one of these numbers: 7 tens, 5 tens, or 6 tens.

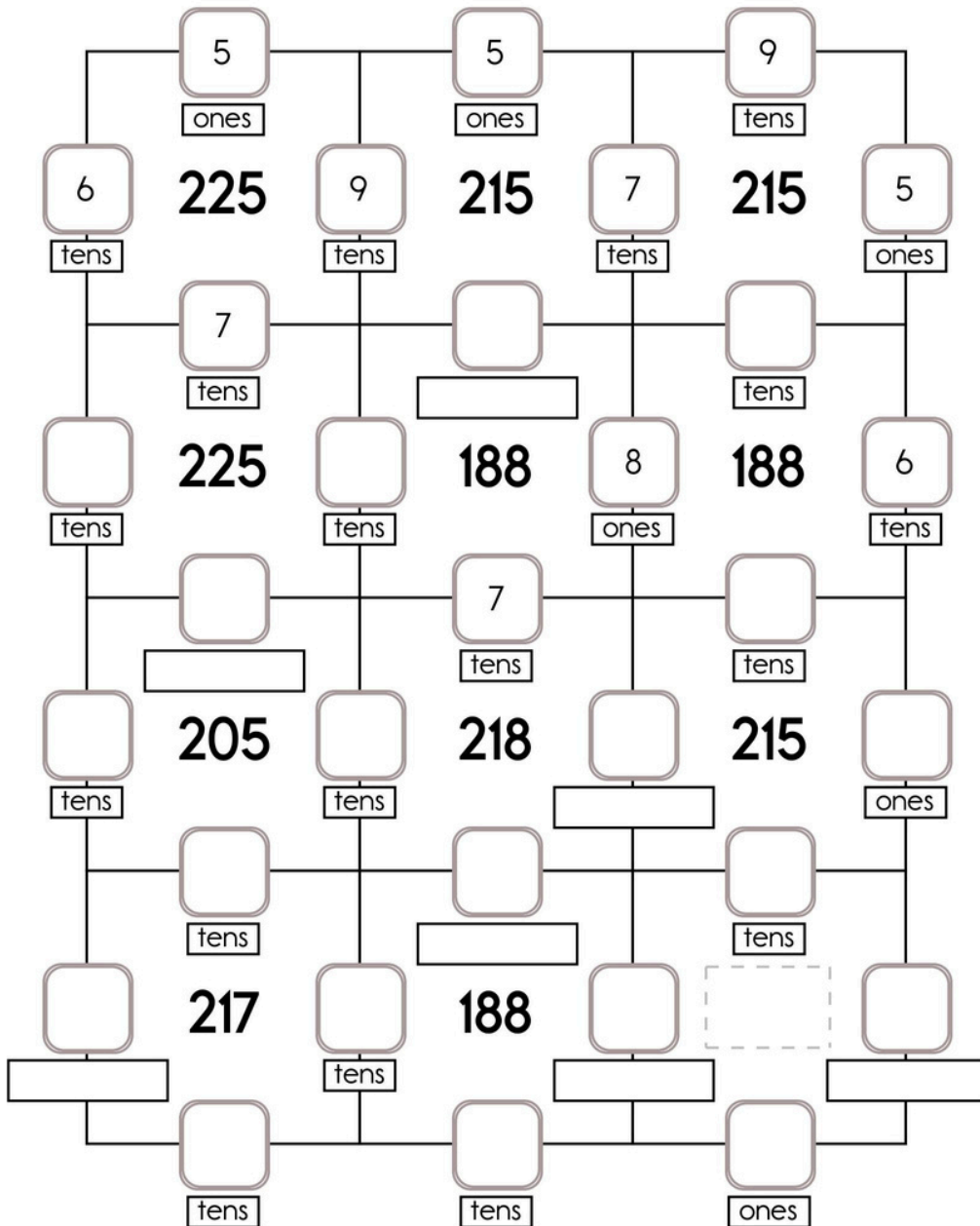
The other three numbers have to all be DIFFERENT and must be from these: 5 ones, 7 ones, 6 ones, 8 ones, or 3 ones.



$7 + 9 = \square$	$9 + 2 = \square$	$14 - 8 = \square$	$1 + 1 = \square$
-------------------	-------------------	--------------------	-------------------

Name: _____

Fill in the missing numbers. How? The sum of the four surrounding numbers is in the center of each square. Exactly one of the four numbers has to be one of these numbers: 7 ones, 8 ones, or 5 ones. The other three numbers have to all be DIFFERENT and must be from these: 7 tens, 5 tens, 9 tens, or 6 tens.



Write an even number with a two in the hundreds place.

What is the fifth month of the year?

16 +	<input type="text"/>	= 26
7 +	<input type="text"/>	= 23

Name: _____

Write the numbers.

six _____

seventeen _____

twenty-five _____

48, 56, 64, 72, 80, _____,

96, 104, 112

$$16 + 2 = \underline{\quad}$$

three plus six equals

$$\begin{array}{r} 12 \\ + 10 \\ \hline \end{array}$$

$$\begin{array}{r} 49 \\ - 4 \\ \hline \end{array}$$

K, K, M, K, K, M, K, K,

_____, K, K, M, K, K, M

The party is at 2 p.m. In only 13 minutes the party starts. What time is it right now?

Circle the even numbers.

89 63 82 46

48 70 77 71 74

65 32 60 33

$$5 + 2 - 5 + 1 + 3$$

C, G, K, O, _____, W

$$7 + 2 - 5 - 1$$

$$\begin{array}{r} 66 \\ + 8 \\ \hline \end{array}$$

double 90

Make your own equation.

$$\underline{\quad} - 5 = \underline{\quad}$$



Name: _____

Get a fidget spinner! Spin it.

I needed to spin _____ time(s) to finish.

6 ones, 8 tens, 9 thousands

Round 47 to the nearest 10.

5 hundreds, 6 thousands, 4 ones, 2 tens

In eight hours it will be midnight. What time is it now?

39, 52, 65, 78, 91, 104,
_____, 130

If you know
 $73 + 29 = 102$
Then what is $73 + 26$?

$5 _ _ _ 1 _ _ _ 4 = 8$

A teacher arranges desks.
She puts 5 desks in each row.
There are 4 rows.
How many desks are there?

0, p, 7, _____, p, 7, 0, p,
7, 0, p, 7

5 tens, 3 ones

Make your own equation.

____ - 7 = ____

Find a clock. What time is it right now?

Name: _____




Write in one letter that completes the names of these winter things.

? __ki__ ?

__kate__

__nowboard__



Write a sentence about the new year ahead.



Write in two numbers that will make this addition problem true.

$$\begin{array}{r} 18 + 23 + \underline{\quad} \\ + \underline{\quad} + 0 \\ = 88 \end{array}$$

Write in two numbers that will make this subtraction problem true.

$$\begin{array}{r} 56 - \underline{\quad} - 12 \\ - \underline{\quad} - 0 \\ = 26 \end{array}$$

Name: _____

Cross off the number that does NOT belong.

50, 55, 60, 65, 69, 70, 75, 80, 85, 90

Why does _____ not belong in the pattern?

Cross off the number that does NOT belong.

7, 7, 3, 3, 7, 7, 3, 3, 7, 7, 3, 7, 3

Why does _____ not belong in the pattern?