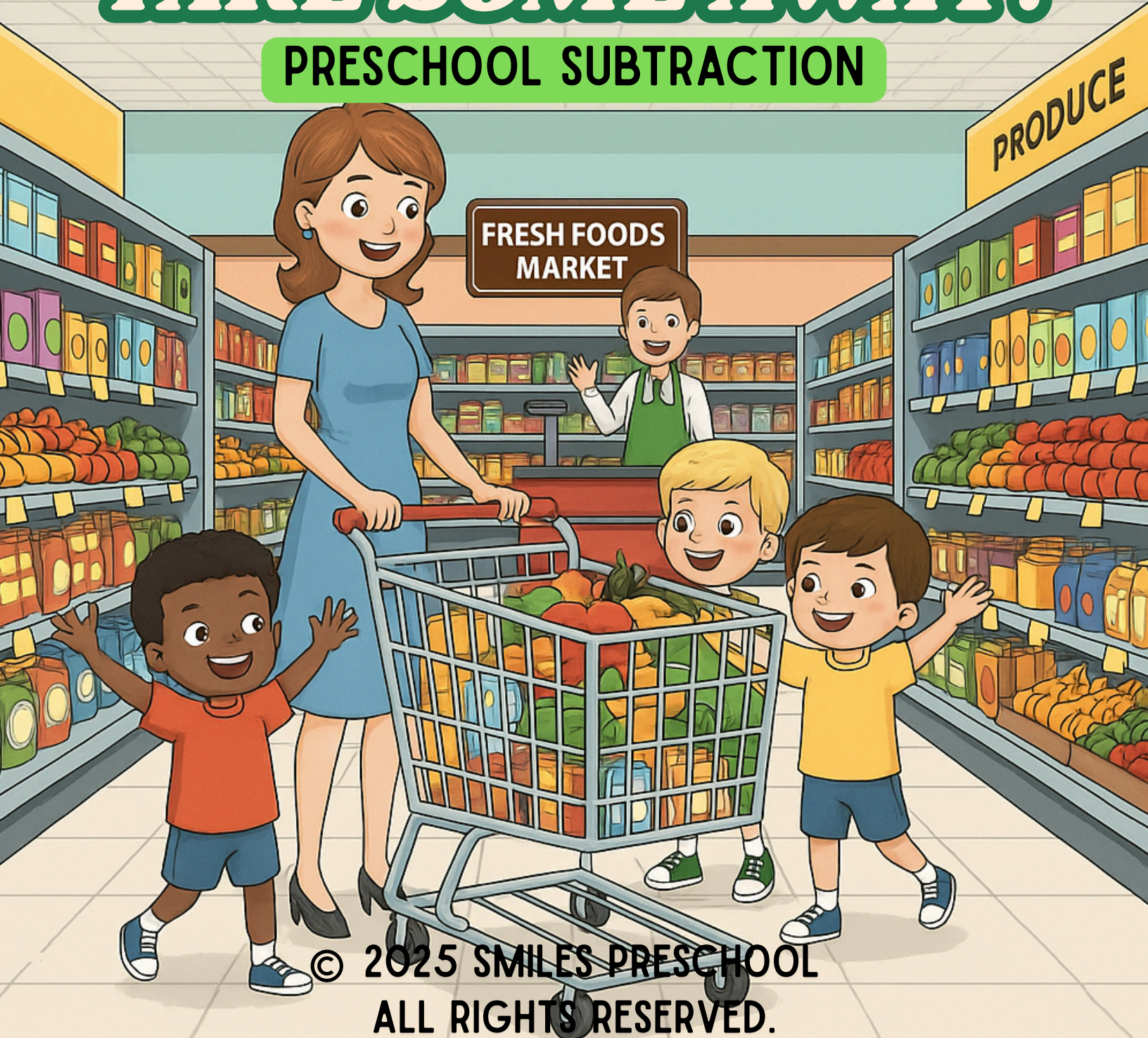




FRUITS IN THE CART **TAKE SOME AWAY!**


PRESCHOOL SUBTRACTION



© 2025 SMILES PRESCHOOL
ALL RIGHTS RESERVED.

NAME:

READ THE NUMBERS ALOUD



ZERO



ONE



TWO



THREE



FOUR



FIVE



SIX




SEVEN



EIGHT



NINE



TEN

© 2025 SMILES PRESCHOOL
ALL RIGHTS RESERVED.



NAME:

WHAT IS THIS SIGN?





**THIS IS A "MINUS" SIGN. IT MEANS WE
TAKE AWAY OR REMOVE THINGS.
WHEN WE SEE THIS SIGN, IT TELLS US
TO SUBTRACT OR TAKE SOME AWAY!**

**© 2025 SMILES PRESCHOOL
ALL RIGHTS RESERVED.**



NAME:

COUNT AND TAKE AWAY GROCERIES.
WRITE THE NUMBER ON THE BLUE BOX.




© 2025 SMILES PRESCHOOL
ALL RIGHTS RESERVED.



NAME:

COUNT AND TAKE AWAY GROCERIES.
WRITE THE NUMBER ON THE BLUE BOX.

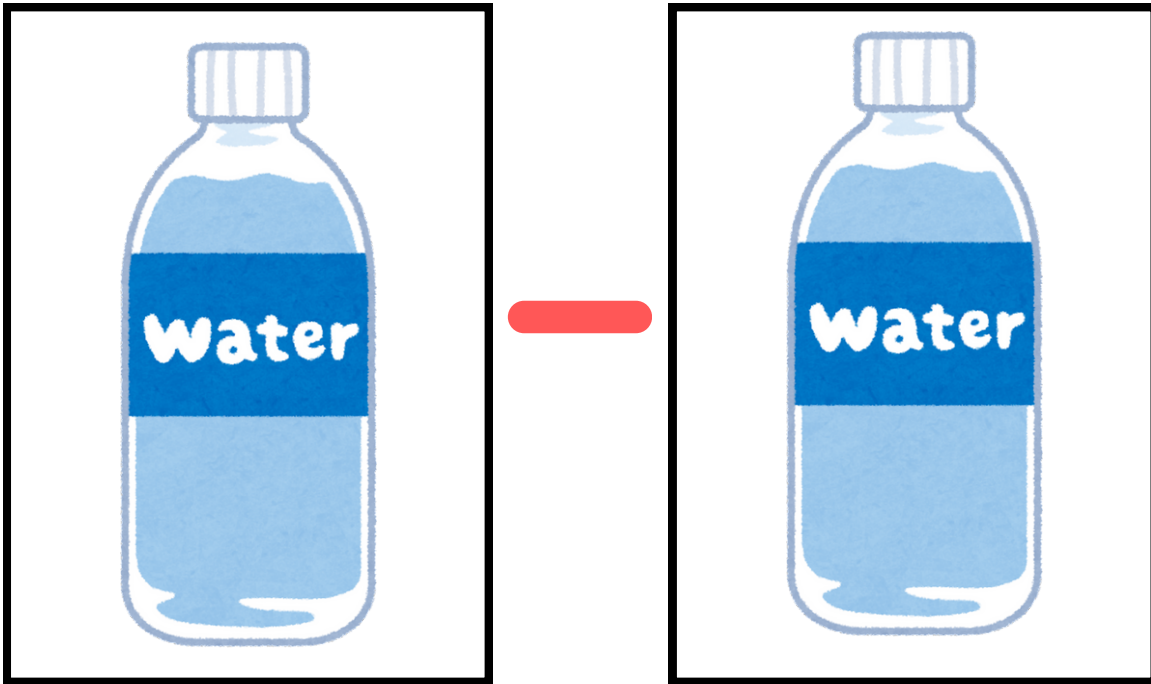


© 2025 SMILES PRESCHOOL
ALL RIGHTS RESERVED.



NAME:

**COUNT AND TAKE AWAY GROCERIES. WRITE
THE NUMBER ON THE BLUE BOX.**





**© 2025 SMILES PRESCHOOL
ALL RIGHTS RESERVED.**



NAME:

**COUNT AND TAKE AWAY GROCERIES. WRITE
THE NUMBER ON THE BLUE BOX.**




**© 2025 SMILES PRESCHOOL
ALL RIGHTS RESERVED.**



NAME:

COUNT AND TAKE AWAY GROCERIES. WRITE THE NUMBER ON THE BLUE BOX.



© 2025 SMILES PRESCHOOL
ALL RIGHTS RESERVED.



NAME:

**READ THE STORY AND WRITE YOUR
ANSWER IN THE BOX.**




**LUNA HAS FOUR MILKS. SHE GAVE MICHAEL
ONE MILK. HOW MANY MILKS DOES LUNA
HAVE LEFT?**

**© 2025 SMILES PRESCHOOL
ALL RIGHTS RESERVED.**



NAME:

**READ THE STORY AND WRITE YOUR
ANSWER IN THE BOX.**



**BEN HAD FOUR TOY CARS. HE GAVE ONE
TO HIS LITTLE BROTHER. HOW MANY TOY
CARS DOES BEN HAVE LEFT?**

**© 2025 SMILES PRESCHOOL
ALL RIGHTS RESERVED.**



NAME:

**READ THE STORY AND WRITE YOUR
ANSWER IN THE BOX.**



**PAT HAD SIX RED BALLOONS. TWO OF THEM
FLEW AWAY INTO THE SKY. HOW MANY
BALLOONS DOES PAT HAVE LEFT?**

**© 2025 SMILES PRESCHOOL
ALL RIGHTS RESERVED.**



NAME:

**READ THE STORY AND WRITE YOUR
ANSWER IN THE BOX.**



**SAM BAKED SEVEN COOKIES. HE ATE ONE AFTER
DINNER.**


HOW MANY COOKIES DOES SAM HAVE LEFT?

**© 2025 SMILES PRESCHOOL
ALL RIGHTS RESERVED.**



NAME:

**READ THE STORY AND WRITE YOUR
ANSWER IN THE BOX.**



**NOAH HAD TWO CRAYONS. HE SHARED ONE
WITH MARIA.
HOW MANY CRAYONS DOES NOAH HAVE LEFT?**

**© 2025 SMILES PRESCHOOL
ALL RIGHTS RESERVED.**



NAME:

SUBTRACTION

$$\boxed{1} - \boxed{1} = \boxed{}$$

$$\boxed{3} - \boxed{2} = \boxed{}$$

$$\boxed{4} - \boxed{3} = \boxed{}$$

$$\boxed{5} - \boxed{4} = \boxed{}$$

NAME:

ADDITION

$5 - 3 = \square$

$5 - 2 = \square$

$6 - 3 = \square$

$9 - 8 = \square$

NAME:

ADDITION

$7 - 5 = \square$

$4 - 2 = \square$

$5 - 4 = \square$

$8 - 2 = \square$

NAME:

ADDITION

$10 - 9 = \square$

$1 - 1 = \square$

$2 - 1 = \square$

$2 - 2 = \square$

NAME:

ADDITION

$10 - 3 = \square$

$9 - 4 = \square$

$8 - 5 = \square$

$7 - 6 = \square$

NAME:

**READ THE STORY AND DRAW A
HEART ON THE CORRECT ANSWER.**

**LUNA HAD 8 SHINY APPLES. SHE
GAVE 3 TO HER FRIEND TIM.
HOW MANY APPLES DOES LUNA
HAVE LEFT?**

4

6

5

**© 2025 SMILES PRESCHOOL
ALL RIGHTS RESERVED.**



NAME:

READ THE STORY AND DRAW A HEART ON THE CORRECT ANSWER.

MAX HAD 6 COLORFUL BALLOONS. THREE BALLOONS FLEW AWAY INTO THE SKY. HOW MANY BALLOONS DOES MAX HAVE LEFT?

3

4

7

© 2025 SMILES PRESCHOOL
ALL RIGHTS RESERVED.



NAME:

**READ THE STORY AND DRAW A
HEART ON THE CORRECT ANSWER.**

**ELLA BAKED 9 CUPCAKES. SHE ATE
1 AFTER LUNCH.
HOW MANY CUPCAKES DOES ELLA
HAVE LEFT?**

9

4

8

© 2025 SMILES PRESCHOOL
ALL RIGHTS RESERVED.



NAME:

READ THE STORY AND DRAW A HEART ON THE CORRECT ANSWER.

**NOAH HAD 4 CRAYONS IN HIS BOX.
HE SHARED 4 WITH HIS FRIEND MIA.
HOW MANY CRAYONS DOES NOAH
HAVE LEFT?**

6

9

0

**© 2025 SMILES PRESCHOOL
ALL RIGHTS RESERVED.**




NAME:


HELP CHECK THE MATH! LOOK AT THE NUMBERS. IS IT RIGHT? COLOR THE CIRCLE UNDER YES OR NO.

$$\boxed{3} - \boxed{1} = \boxed{7}$$

YES



NO




NAME:


HELP CHECK THE MATH! LOOK AT THE NUMBERS. IS IT RIGHT? COLOR THE CIRCLE UNDER YES OR NO.

$$\mathbf{8} - \mathbf{6} = \mathbf{2}$$

YES



NO




NAME:


HELP CHECK THE MATH! LOOK AT THE NUMBERS. IS IT RIGHT? COLOR THE CIRCLE UNDER YES OR NO.

$$\boxed{9} - \boxed{4} = \boxed{10}$$

YES



NO




NAME:

HELP CHECK THE MATH! LOOK AT THE NUMBERS. IS IT RIGHT? COLOR THE CIRCLE UNDER YES OR NO.

$$\boxed{9} - \boxed{3} = \boxed{6}$$

YES



NO

