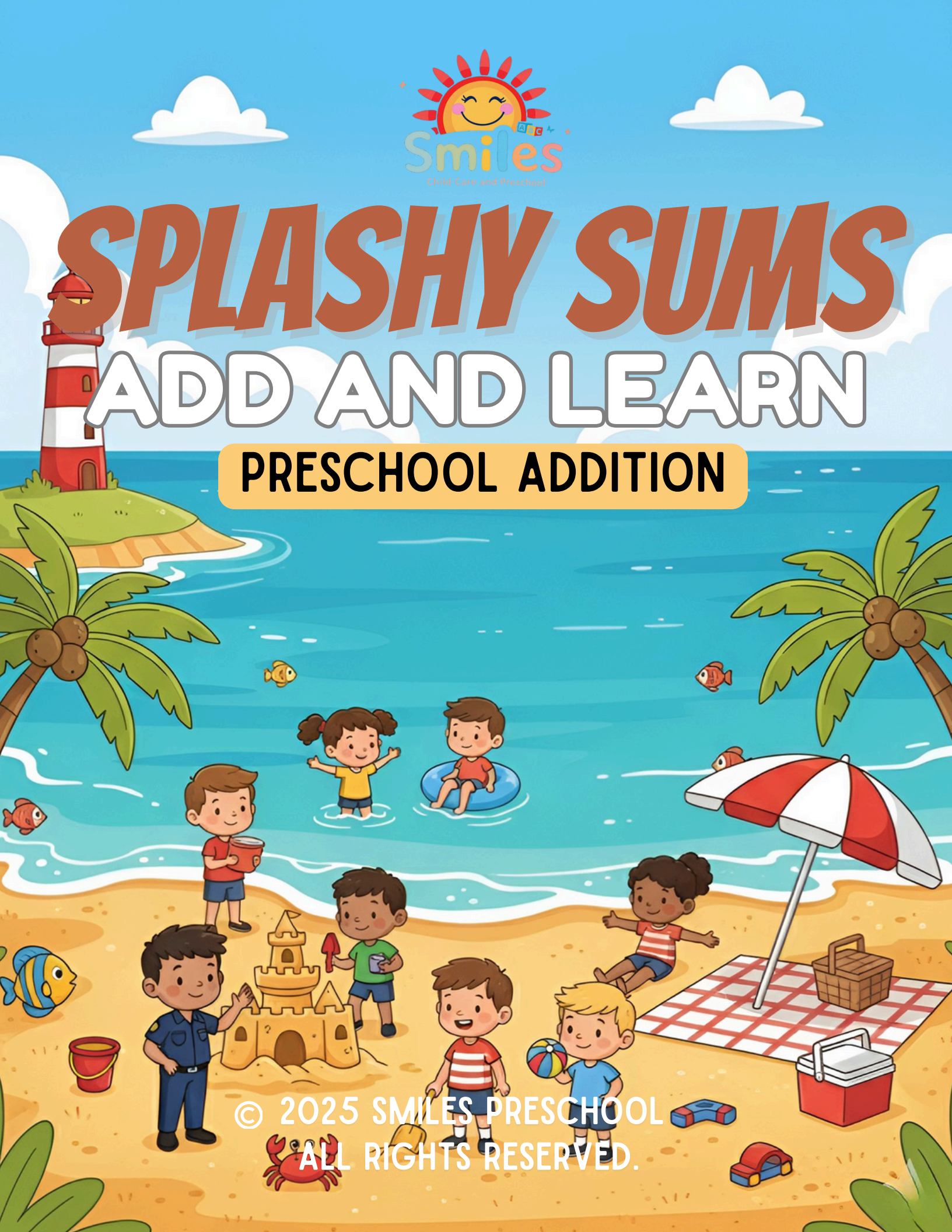




# SPLASHY SUMS

## ADD AND LEARN


### PRESCHOOL ADDITION



© 2025 SMILES PRESCHOOL  
ALL RIGHTS RESERVED.

NAME:

# READ THE NUMBERS ALOUD



ZERO



ONE



TWO



THREE



FOUR



FIVE



SIX




SEVEN



EIGHT



NINE



TEN

© 2025 SMILES PRESCHOOL  
ALL RIGHTS RESERVED.



**NAME:**

**WHAT IS THIS SIGN?**



**THIS IS A "PLUS" MEANS WE PUT  
THINGS TOGETHER.  
WHEN WE SEE THIS SIGN, IT TELLS US  
TO ADD MORE!**

**© 2025 SMILES PRESCHOOL  
ALL RIGHTS RESERVED.**



**NAME:**

**COUNT AND ADD ALL SEASHELLS IN BOX.  
PUT THE NUMBER ON THE BLUE BOX.**



**+**





**© 2025 SMILES PRESCHOOL  
ALL RIGHTS RESERVED.**



**NAME:**

**COUNT AND ADD ALL BUCKETS IN BOX.  
PUT THE NUMBER ON THE BLUE BOX.**






**© 2025 SMILES PRESCHOOL  
ALL RIGHTS RESERVED.**



NAME:

COUNT AND ADD ALL BUCKETS IN BOX.  
PUT THE NUMBER ON THE BLUE BOX.






© 2025 SMILES PRESCHOOL  
ALL RIGHTS RESERVED.



NAME:

COUNT AND ADD ALL BUCKETS IN BOX.  
PUT THE NUMBER ON THE BLUE BOX.

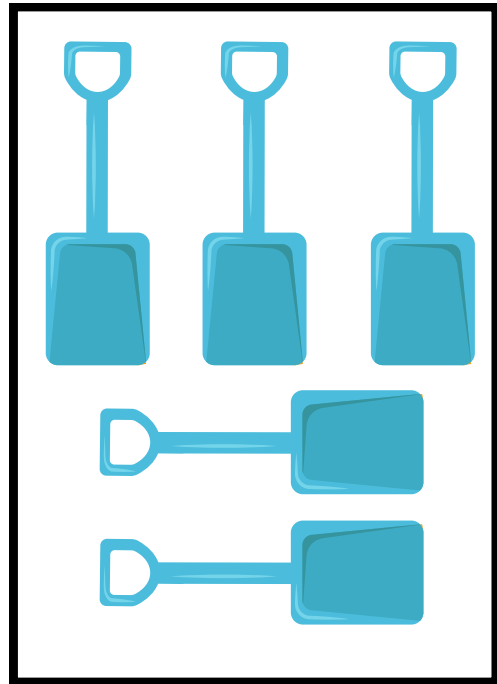
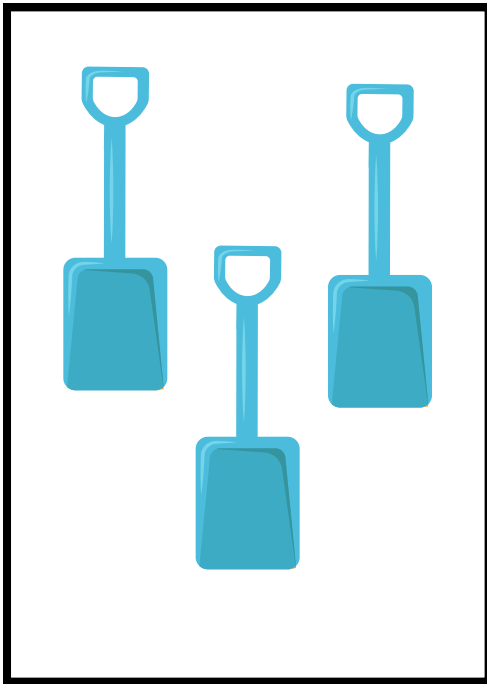


© 2025 SMILES PRESCHOOL  
ALL RIGHTS RESERVED.



**NAME:**

**COUNT AND ADD ALL BUCKETS IN BOX.  
PUT THE NUMBER ON THE BLUE BOX.**



© 2025 SMILES PRESCHOOL  
ALL RIGHTS RESERVED.



**NAME:**

**READ THE STORY AND WRITE YOUR  
ANSWER IN THE BOX.**



**MICO HAS ONE STARFISH. MICA GAVE HIM TWO MORE  
STARFISHES. HOW MANY STARFISHES DOES MICO HAVE  
NOW?**

**© 2025 SMILES PRESCHOOL  
ALL RIGHTS RESERVED.**



**NAME:**

**READ THE STORY AND WRITE YOUR  
ANSWER IN THE BOX.**



**KENNY HAS TWO BALLS AND CALEB GAVE HIM THREE  
MORE BALLS. HOW MANY BALLS DOES KENNY HAVE  
NOW?**

**© 2025 SMILES PRESCHOOL  
ALL RIGHTS RESERVED.**



**NAME:**

**READ THE STORY AND WRITE YOUR  
ANSWER IN THE BOX.**



**ROSIE HAS THREE ROCKS AND REDDY GAVE HER TWO  
MORE ROCKS. HOW MANY ROCKS DOES ROSIE HAVE  
NOW?**

**© 2025 SMILES PRESCHOOL  
ALL RIGHTS RESERVED.**



**NAME:**

**READ THE STORY AND WRITE YOUR  
ANSWER IN THE BOX.**



**TERON HAS FIVE SHOVELS. HIS DAD BOUGHT HIM ONE  
MORE SHOVEL. HOW MANY SHOVELS DOES TERON  
HAVE NOW?**

**© 2025 SMILES PRESCHOOL  
ALL RIGHTS RESERVED.**



**NAME:**

**READ THE STORY AND WRITE YOUR  
ANSWER IN THE BOX.**



**HAILEY BOUGHT FIVE POPSICLES.  
HER MOM BOUGHT HER TWO MORE POPSICLES.  
HOW MANY POPSICLES DOES HAILEY HAVE NOW?**

**© 2025 SMILES PRESCHOOL  
ALL RIGHTS RESERVED.**



NAME:

## ADDITION

$$\boxed{1} + \boxed{1} = \boxed{\phantom{00}}$$

$$\boxed{2} + \boxed{2} = \boxed{\phantom{00}}$$

$$\boxed{3} + \boxed{3} = \boxed{\phantom{00}}$$

$$\boxed{4} + \boxed{4} = \boxed{\phantom{00}}$$

NAME:

## ADDITION

$$\boxed{5} + \boxed{5} = \boxed{\phantom{00}}$$

$$\boxed{5} + \boxed{2} = \boxed{\phantom{00}}$$

$$\boxed{0} + \boxed{3} = \boxed{\phantom{00}}$$

$$\boxed{1} + \boxed{8} = \boxed{\phantom{00}}$$

NAME:

## ADDITION

$2 + 5 = \square$

$4 + 6 = \square$

$2 + 4 = \square$

$1 + 2 = \square$

NAME:

## ADDITION

$1 + 9 = \square$

$1 + 0 = \square$

$2 + 1 = \square$

$2 + 2 = \square$

NAME:

## ADDITION

$2 + 3 = \square$

$2 + 4 = \square$

$2 + 5 = \square$

$2 + 6 = \square$

**NAME:**

**READ THE STORY AND DRAW A  
HEART ON THE CORRECT ANSWER.**

**TERON HAS FIVE SHOVELS. HIS DAD  
BOUGHT HIM ONE MORE SHOVEL,  
HOW MANY SHOVELS DOES TERON  
HAVE NOW?**

**4**

**6**

**5**

**NAME:**

**READ THE STORY AND DRAW A HEART ON THE CORRECT ANSWER.**

**MARY BOUGHT TWO UMBRELLAS.  
HER BROTHER BOUGHT HER TWO  
MORE UMBRELLAS. HOW MANY  
UMBRELLAS DOES MARY HAVE  
NOW?**

**3**

**4**

**7**

**© 2025 SMILES PRESCHOOL  
ALL RIGHTS RESERVED.**



**NAME:**

**READ THE STORY AND DRAW A  
HEART ON THE CORRECT ANSWER.**

**HAILEY BOUGHT SIX POPSICLES.  
HER MOM BOUGHT HER TWO  
MORE POPSICLES.  
HOW MANY POPSICLES DOES  
HAILEY HAVE NOW?**

9

4

8

© 2025 SMILES PRESCHOOL  
ALL RIGHTS RESERVED.



**NAME:**

**READ THE STORY AND DRAW A  
HEART ON THE CORRECT ANSWER.**

**ALEX FOUND A ONE SEASHELL.  
MOM GAVE HIM EIGHT MORE  
SEASHELLS. HOW MANY SEASHELLS  
DOES ALEX HAVE NOW?**

**6**

**9**

**0**

**© 2025 SMILES PRESCHOOL  
ALL RIGHTS RESERVED.**




**NAME:**


**HELP CHECK THE MATH! LOOK AT THE NUMBERS. IS IT RIGHT? COLOR THE CIRCLE UNDER YES OR NO.**

$$\boxed{9} + \boxed{1} = \boxed{7}$$

**YES**



**NO**




**NAME:**


**HELP CHECK THE MATH! LOOK AT THE NUMBERS. IS IT RIGHT? COLOR THE CIRCLE UNDER YES OR NO.**

$$\boxed{2} + \boxed{6} = \boxed{8}$$

**YES**



**NO**




**NAME:**


**HELP CHECK THE MATH! LOOK AT THE NUMBERS. IS IT RIGHT? COLOR THE CIRCLE UNDER YES OR NO.**

$$\boxed{1} + \boxed{4} = \boxed{10}$$

**YES**



**NO**




**NAME:**

**HELP CHECK THE MATH! LOOK AT THE NUMBERS. IS IT RIGHT? COLOR THE CIRCLE UNDER YES OR NO.**

$$\boxed{5} + \boxed{3} = \boxed{8}$$

**YES**



**NO**

